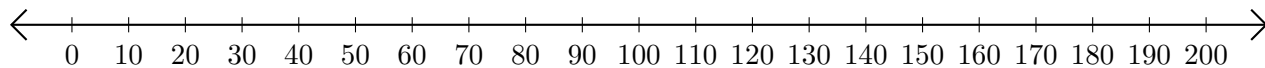


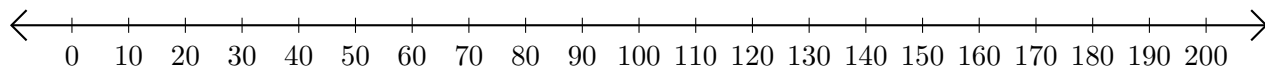
Adding and Subtracting on Number Lines (E)

Use the number lines to calculate each sum or difference.

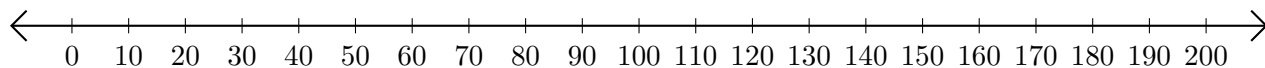
1. $160 + 20 = \underline{\hspace{2cm}}$



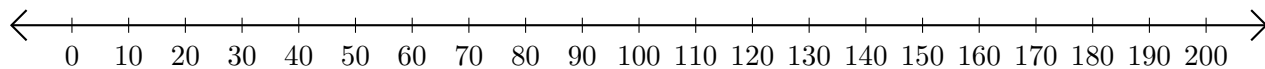
2. $130 - 120 = \underline{\hspace{2cm}}$



3. $100 + 50 = \underline{\hspace{2cm}}$



4. $160 - 80 = \underline{\hspace{2cm}}$



5. $190 - 180 = \underline{\hspace{2cm}}$

