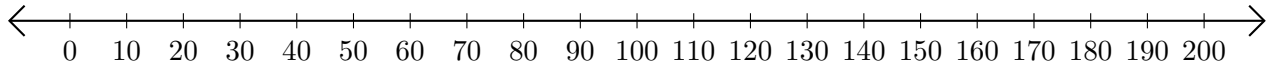


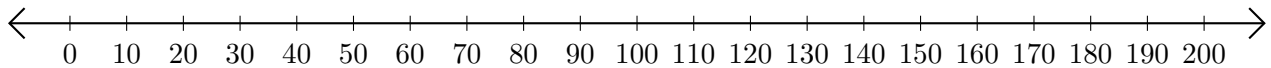
# Adding and Subtracting on Number Lines (F)

Use the number lines to calculate each sum or difference.

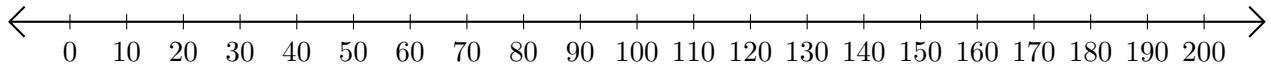
1.  $50 + 20 = \underline{\quad}$



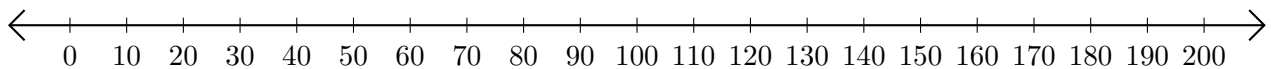
2.  $200 - 160 = \underline{\quad}$



3.  $80 + 70 = \underline{\quad}$



4.  $190 - 180 = \underline{\quad}$



5.  $90 - 60 = \underline{\quad}$

