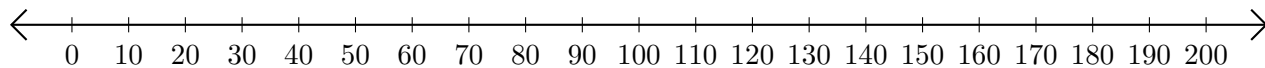


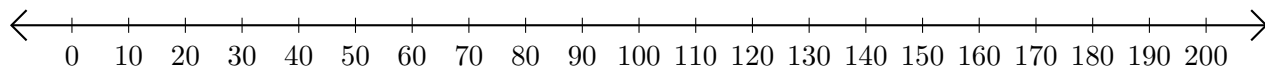
# Adding and Subtracting on Number Lines (H)

Use the number lines to calculate each sum or difference.

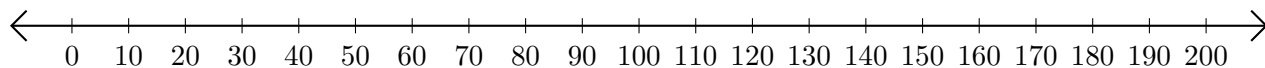
1.  $150 + 10 = \underline{\hspace{2cm}}$



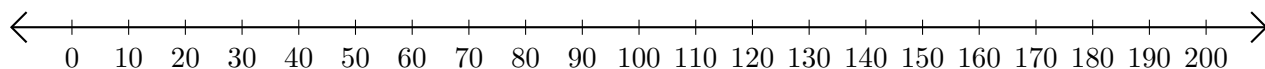
2.  $100 - 40 = \underline{\hspace{2cm}}$



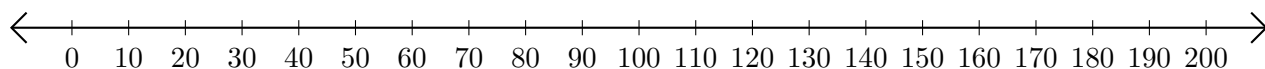
3.  $190 + 10 = \underline{\hspace{2cm}}$



4.  $190 - 70 = \underline{\hspace{2cm}}$



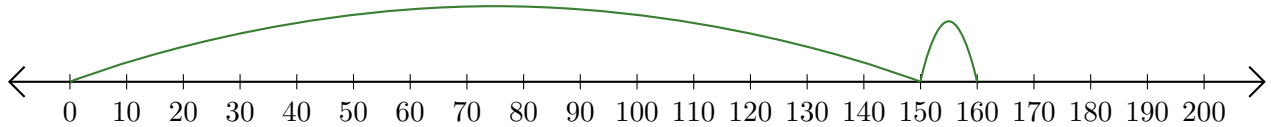
5.  $90 + 100 = \underline{\hspace{2cm}}$



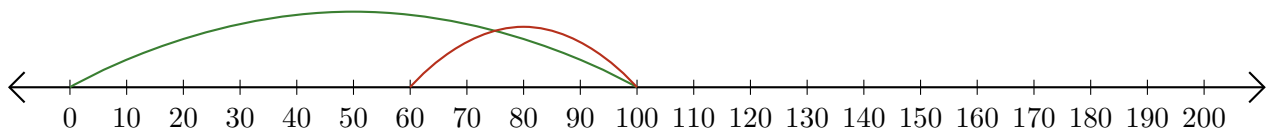
# Adding and Subtracting on Number Lines (H) Answers

Use the number lines to calculate each sum or difference.

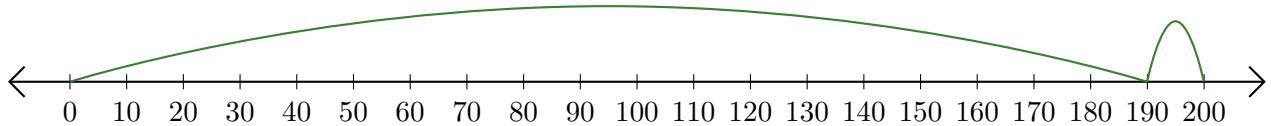
1.  $150 + 10 = \underline{160}$



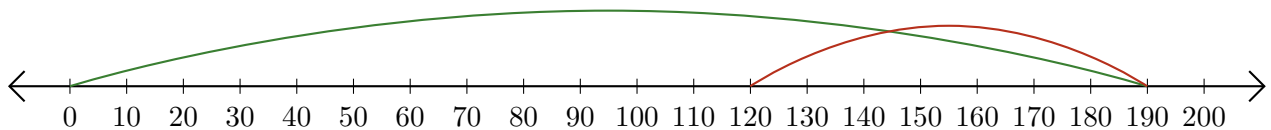
2.  $100 - 40 = \underline{60}$



3.  $190 + 10 = \underline{200}$



4.  $190 - 70 = \underline{120}$



5.  $90 + 100 = \underline{190}$

