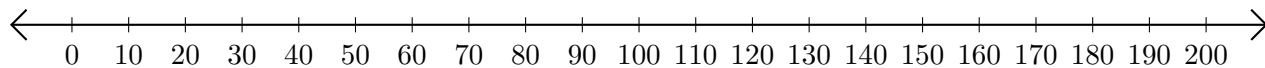


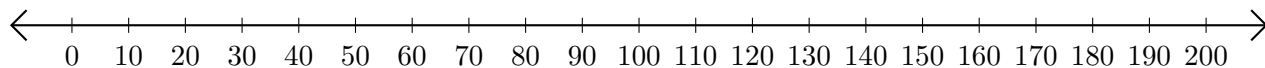
Adding and Subtracting on Number Lines (H)

Use the number lines to calculate each sum or difference.

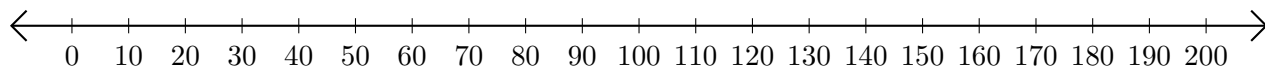
1. $150 + 10 = \underline{\hspace{2cm}}$



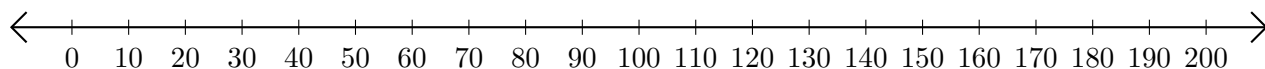
2. $100 - 40 = \underline{\hspace{2cm}}$



3. $190 + 10 = \underline{\hspace{2cm}}$



4. $190 - 70 = \underline{\hspace{2cm}}$



5. $90 + 100 = \underline{\hspace{2cm}}$

