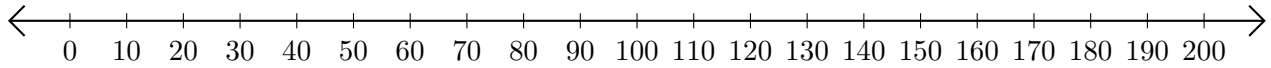


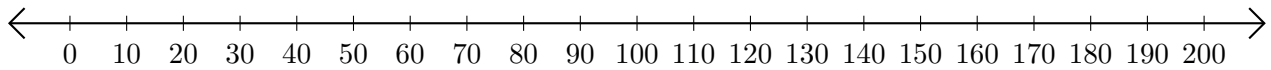
# Adding and Subtracting on Number Lines (I)

Use the number lines to calculate each sum or difference.

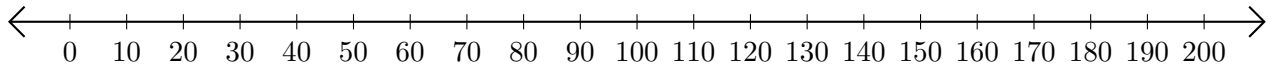
1.  $50 + 70 = \underline{\quad}$



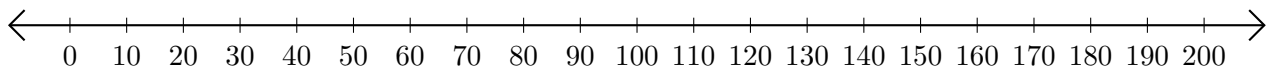
2.  $80 - 20 = \underline{\quad}$



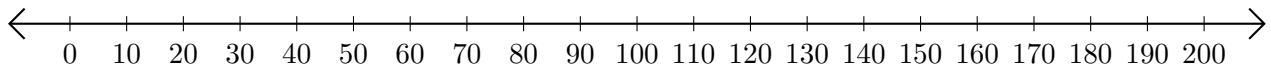
3.  $100 + 70 = \underline{\quad}$



4.  $200 - 190 = \underline{\quad}$



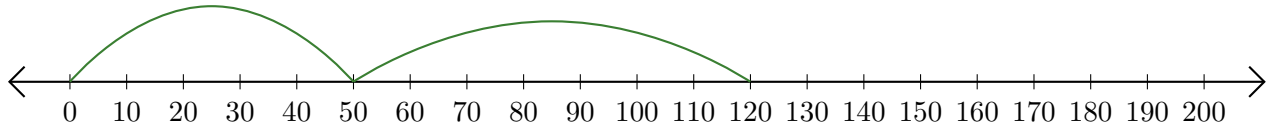
5.  $80 + 20 = \underline{\quad}$



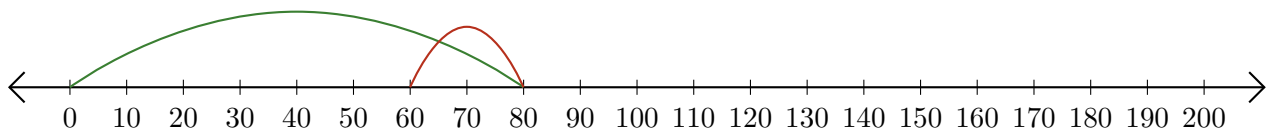
# Adding and Subtracting on Number Lines (I) Answers

Use the number lines to calculate each sum or difference.

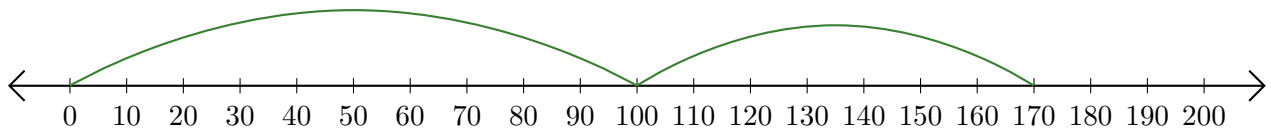
1.  $50 + 70 = \underline{120}$



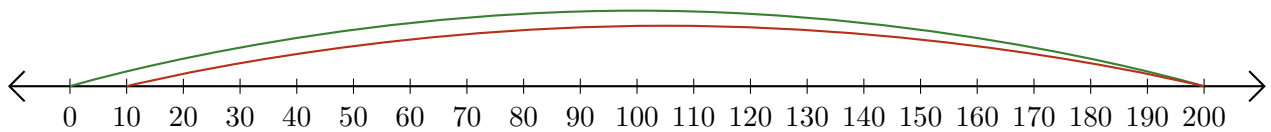
2.  $80 - 20 = \underline{60}$



3.  $100 + 70 = \underline{170}$



4.  $200 - 190 = \underline{10}$



5.  $80 + 20 = \underline{100}$

