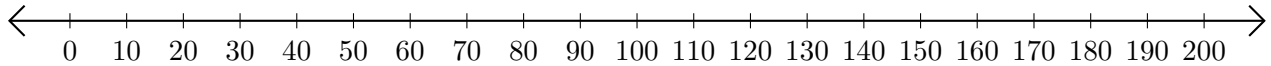


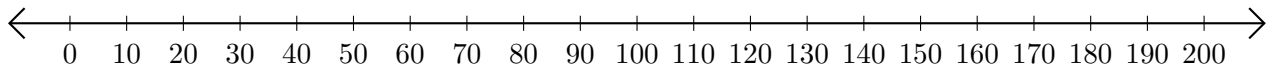
# Adding and Subtracting on Number Lines (J)

Use the number lines to calculate each sum or difference.

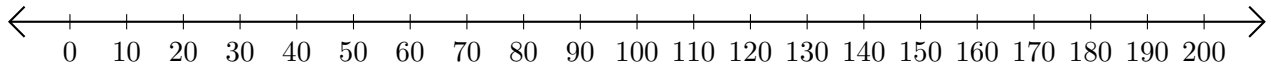
1.  $70 + 100 = \underline{\hspace{2cm}}$



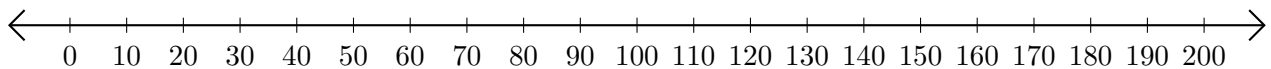
2.  $190 - 170 = \underline{\hspace{2cm}}$



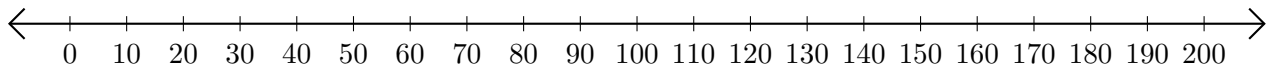
3.  $180 + 10 = \underline{\hspace{2cm}}$



4.  $160 - 150 = \underline{\hspace{2cm}}$



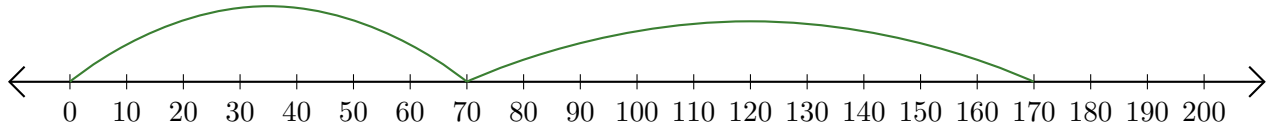
5.  $80 + 110 = \underline{\hspace{2cm}}$



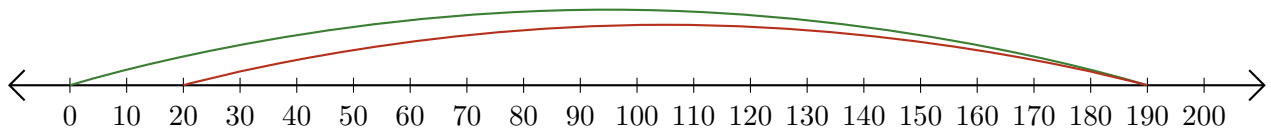
# Adding and Subtracting on Number Lines (J) Answers

Use the number lines to calculate each sum or difference.

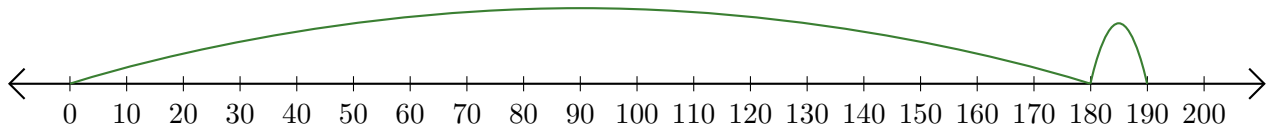
1.  $70 + 100 = \underline{170}$



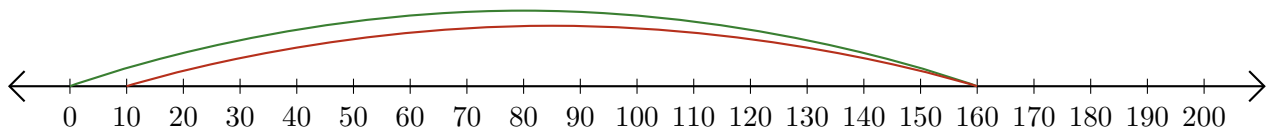
2.  $190 - 170 = \underline{20}$



3.  $180 + 10 = \underline{190}$



4.  $160 - 150 = \underline{10}$



5.  $80 + 110 = \underline{190}$

