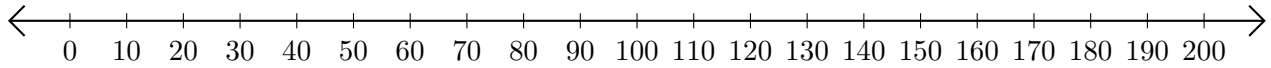


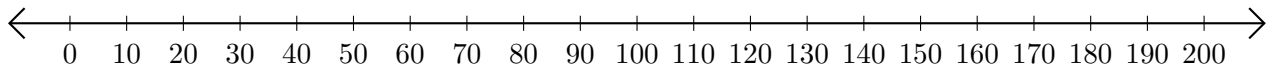
Adding and Subtracting on Number Lines (J)

Use the number lines to calculate each sum or difference.

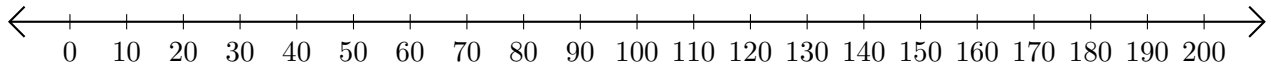
1. $70 + 100 = \underline{\quad}$



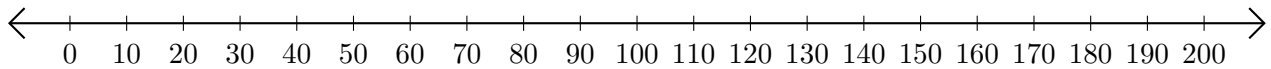
2. $190 - 170 = \underline{\quad}$



3. $180 + 10 = \underline{\quad}$



4. $160 - 150 = \underline{\quad}$



5. $80 + 110 = \underline{\quad}$

