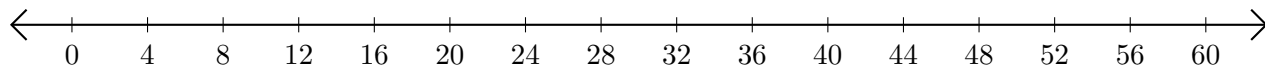


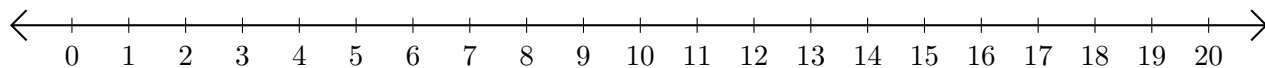
Adding and Subtracting on Number Lines (A)

Use the number lines to calculate each sum or difference.

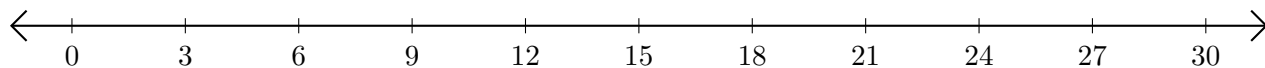
1. $28 + 28 = \underline{\quad}$



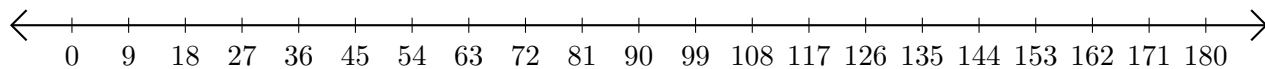
2. $19 - 7 = \underline{\quad}$



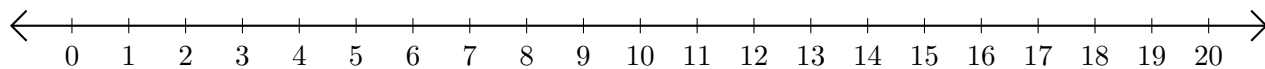
3. $27 + 3 = \underline{\quad}$



4. $171 - 108 = \underline{\quad}$



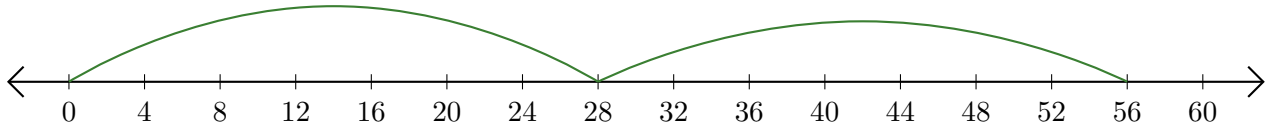
5. $8 + 1 = \underline{\quad}$



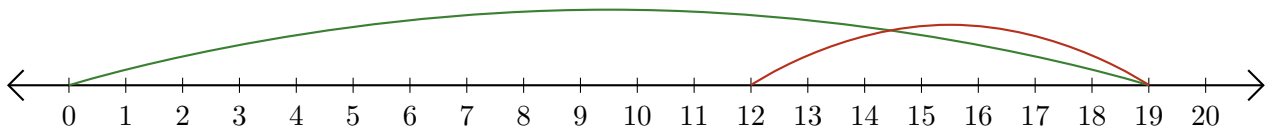
Adding and Subtracting on Number Lines (A) Answers

Use the number lines to calculate each sum or difference.

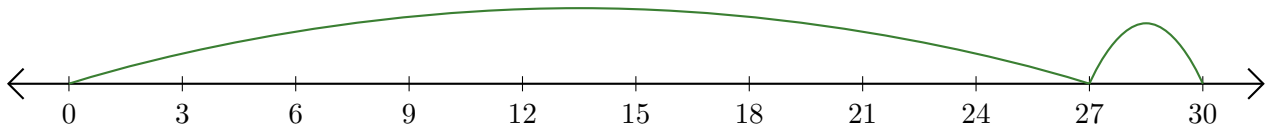
1. $28 + 28 = \underline{56}$



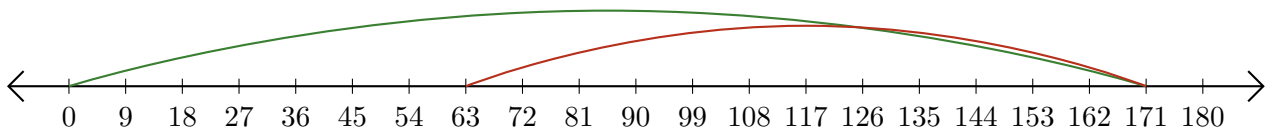
2. $19 - 7 = \underline{12}$



3. $27 + 3 = \underline{30}$



4. $171 - 108 = \underline{63}$



5. $8 + 1 = \underline{9}$

