

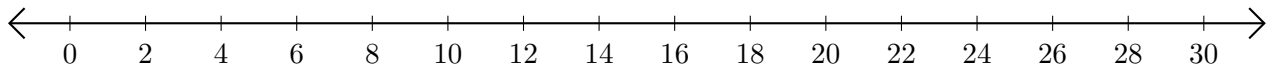
# Adding and Subtracting on Number Lines (B)

Use the number lines to calculate each sum or difference.

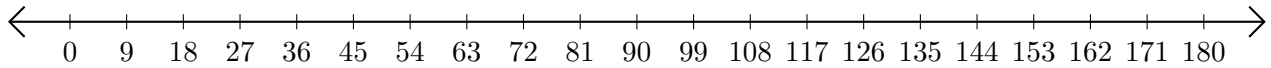
1.  $45 + 5 = \underline{\quad}$



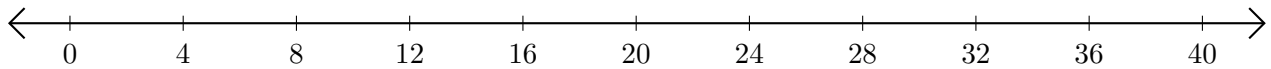
2.  $26 - 22 = \underline{\quad}$



3.  $45 + 99 = \underline{\quad}$



4.  $40 - 28 = \underline{\quad}$



5.  $120 - 112 = \underline{\quad}$

