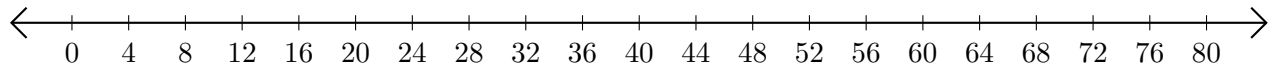


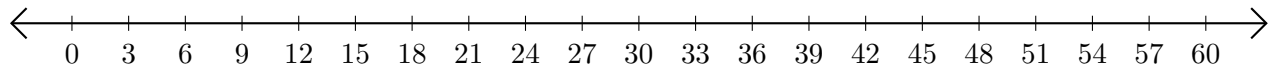
Adding and Subtracting on Number Lines (E)

Use the number lines to calculate each sum or difference.

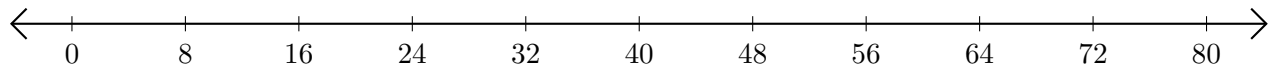
1. $44 + 16 = \underline{\quad}$



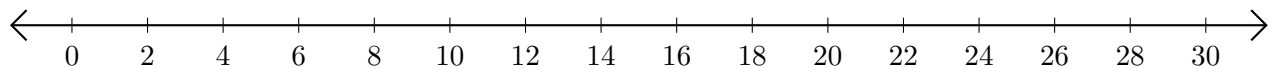
2. $48 - 27 = \underline{\quad}$



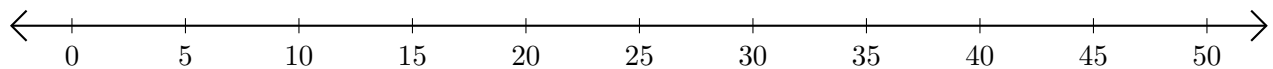
3. $8 + 40 = \underline{\quad}$



4. $12 - 2 = \underline{\quad}$



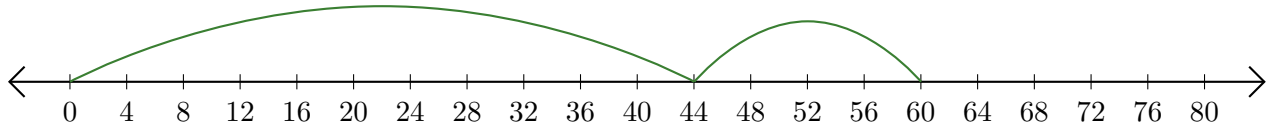
5. $10 + 40 = \underline{\quad}$



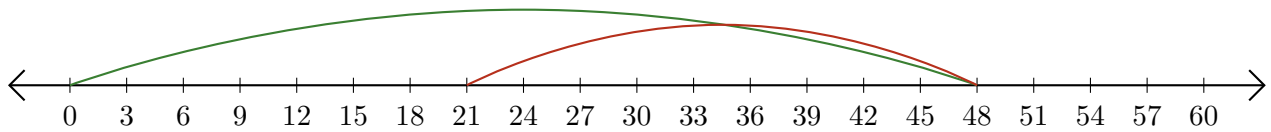
Adding and Subtracting on Number Lines (E) Answers

Use the number lines to calculate each sum or difference.

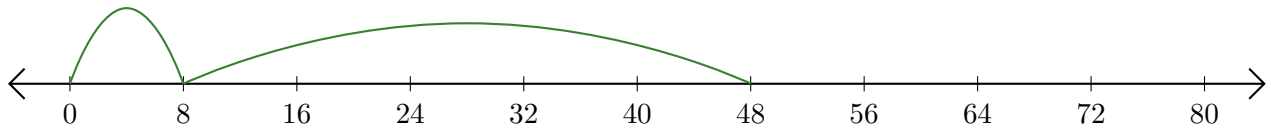
1. $44 + 16 = \underline{60}$




2. $48 - 27 = \underline{21}$



3. $8 + 40 = \underline{48}$



4. $12 - 2 = \underline{10}$



5. $10 + 40 = \underline{50}$

