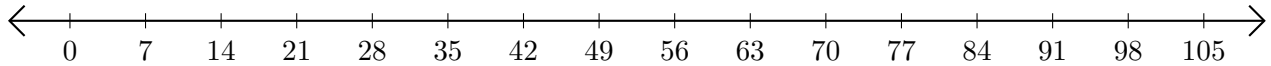


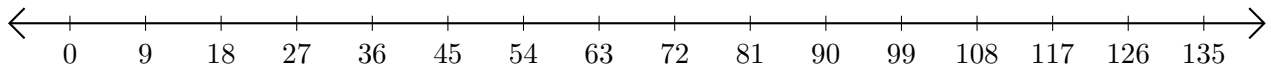
Adding and Subtracting on Number Lines (I)

Use the number lines to calculate each sum or difference.

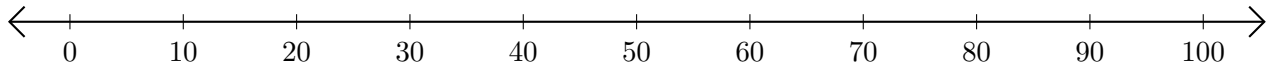
1. $98 + 7 = \underline{\quad}$



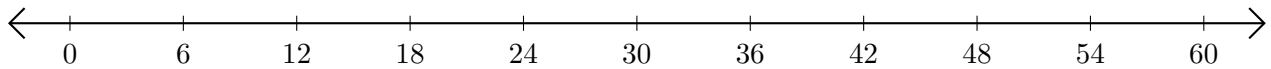
2. $108 - 99 = \underline{\quad}$



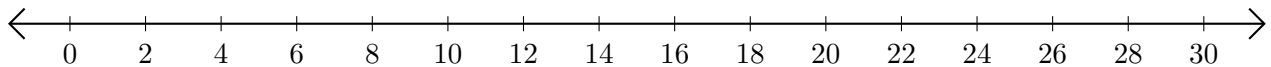
3. $90 + 10 = \underline{\quad}$



4. $60 - 24 = \underline{\quad}$



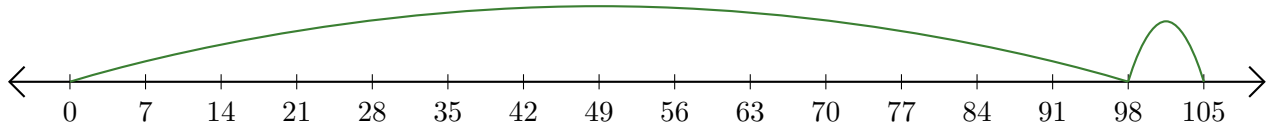
5. $28 - 20 = \underline{\quad}$



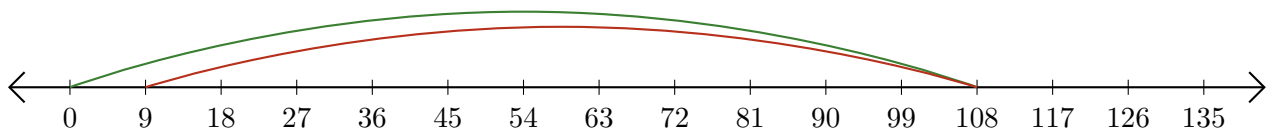
Adding and Subtracting on Number Lines (I) Answers

Use the number lines to calculate each sum or difference.

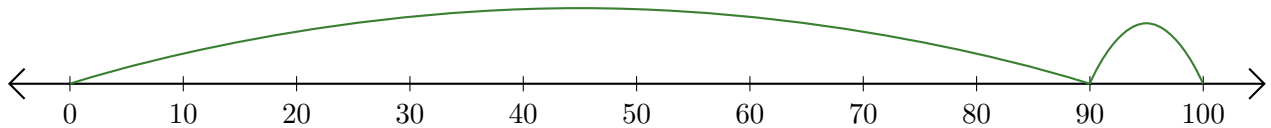
1. $98 + 7 = \underline{105}$



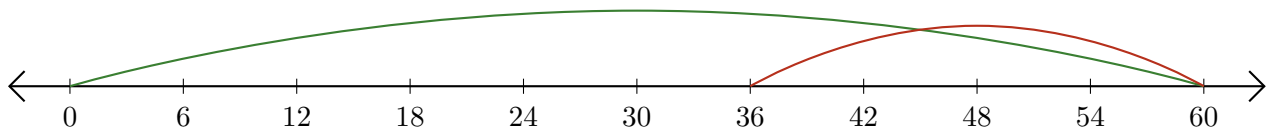
2. $108 - 99 = \underline{9}$



3. $90 + 10 = \underline{100}$



4. $60 - 24 = \underline{36}$



5. $28 - 20 = \underline{8}$

