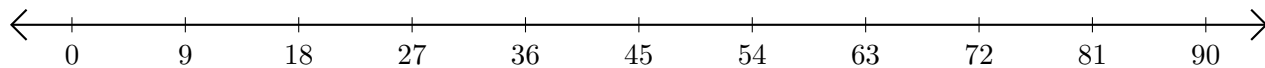


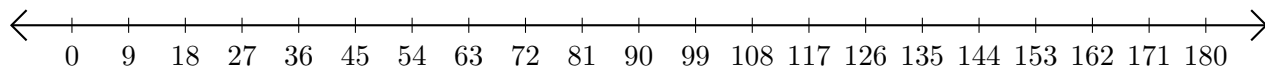
Adding and Subtracting on Number Lines (J)

Use the number lines to calculate each sum or difference.

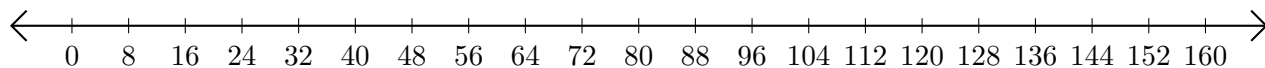
1. $81 + 9 = \underline{\quad}$



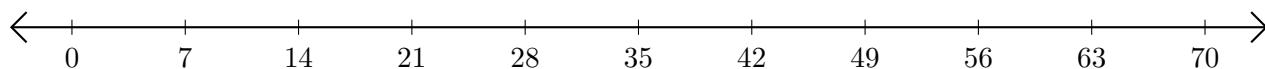
2. $153 - 81 = \underline{\quad}$



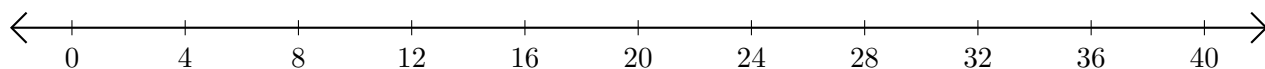
3. $152 + 8 = \underline{\quad}$



4. $56 - 42 = \underline{\quad}$



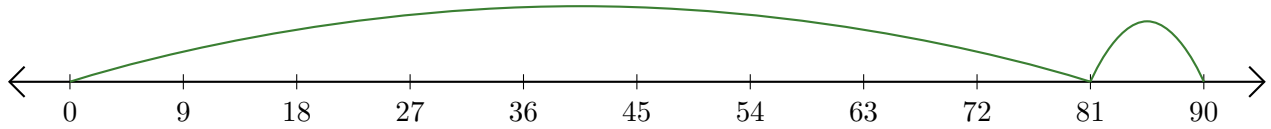
5. $4 + 20 = \underline{\quad}$



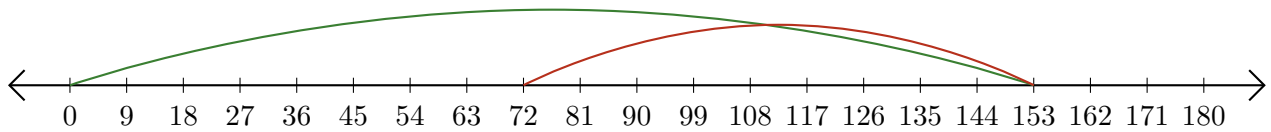
Adding and Subtracting on Number Lines (J) Answers

Use the number lines to calculate each sum or difference.

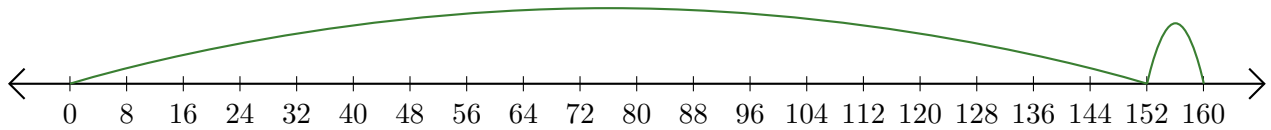
1. $81 + 9 = \underline{90}$



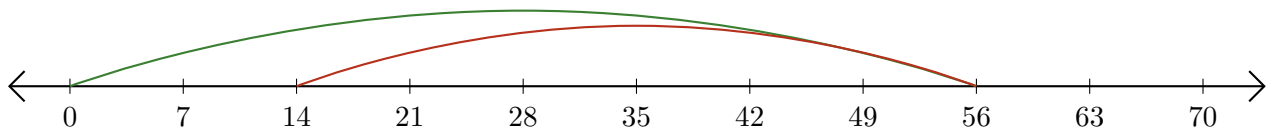
2. $153 - 81 = \underline{72}$



3. $152 + 8 = \underline{160}$



4. $56 - 42 = \underline{14}$



5. $4 + 20 = \underline{24}$

