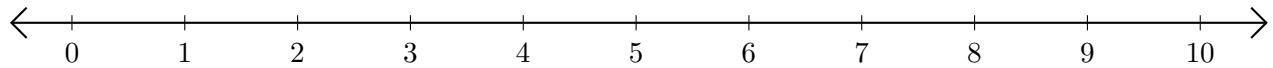


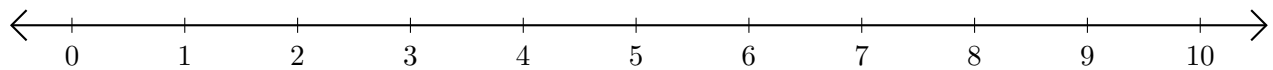
Subtracting on Number Lines (C)

Use the number lines to calculate each difference.

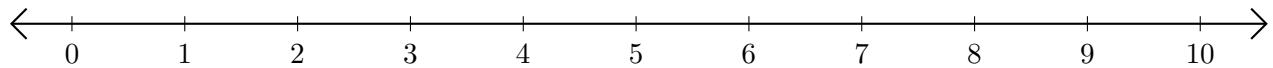
1. $10 - 6 = \underline{\quad}$



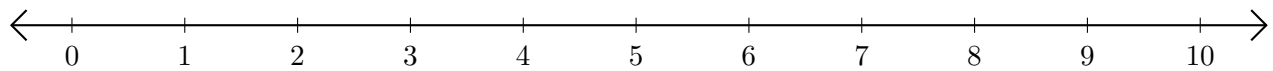
2. $9 - 7 = \underline{\quad}$



3. $5 - 1 = \underline{\quad}$



4. $4 - 3 = \underline{\quad}$



5. $4 - 2 = \underline{\quad}$

