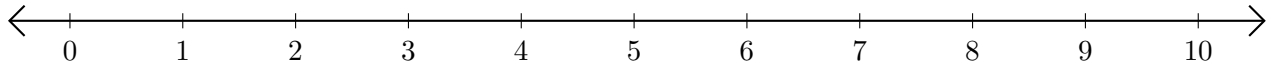


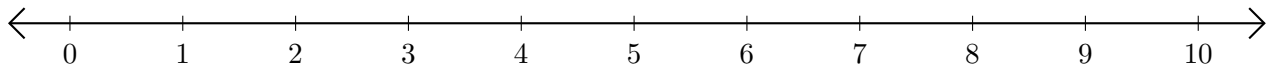
## Subtracting on Number Lines (D)

Use the number lines to calculate each difference.

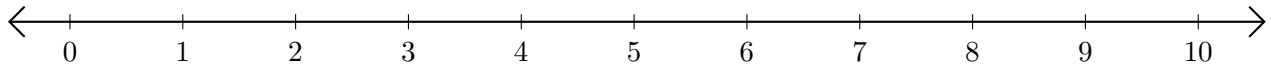
1.  $9 - 5 = \underline{\quad}$



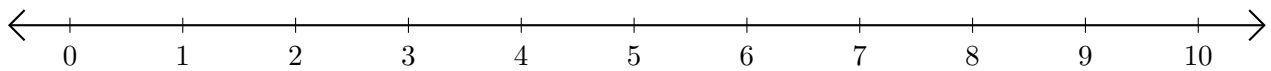
2.  $10 - 9 = \underline{\quad}$



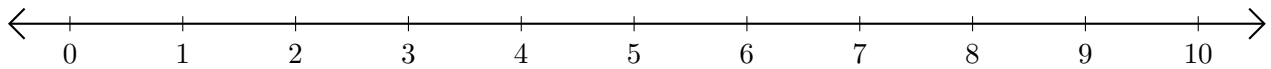
3.  $8 - 1 = \underline{\quad}$



4.  $10 - 7 = \underline{\quad}$



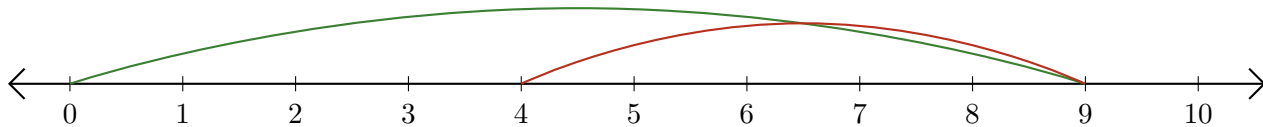
5.  $10 - 2 = \underline{\quad}$



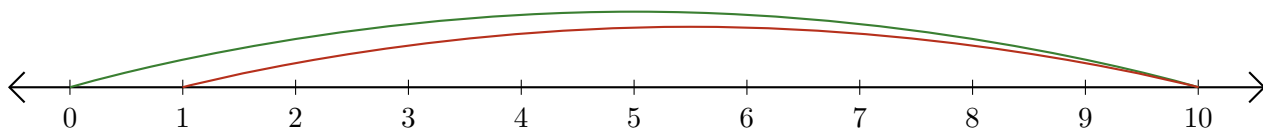
# Subtracting on Number Lines (D) Answers

Use the number lines to calculate each difference.

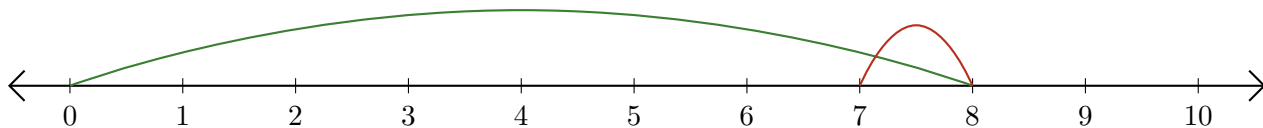
1.  $9 - 5 = \underline{4}$



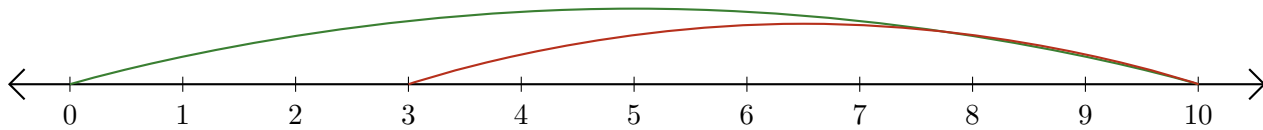
2.  $10 - 9 = \underline{1}$



3.  $8 - 1 = \underline{7}$



4.  $10 - 7 = \underline{3}$



5.  $10 - 2 = \underline{8}$

