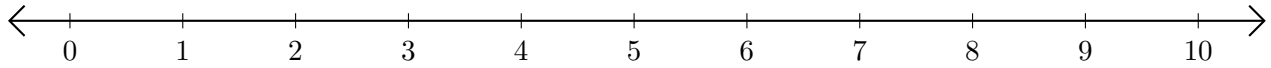


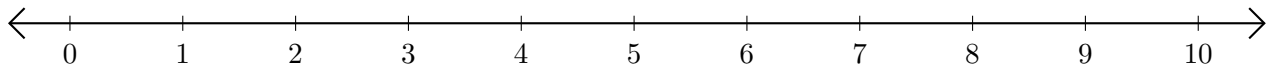
Subtracting on Number Lines (D)

Use the number lines to calculate each difference.

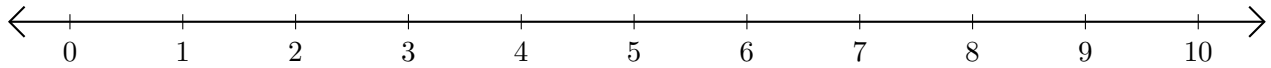
1. $9 - 5 = \underline{\quad}$



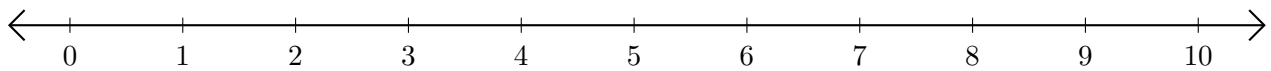
2. $10 - 9 = \underline{\quad}$



3. $8 - 1 = \underline{\quad}$



4. $10 - 7 = \underline{\quad}$



5. $10 - 2 = \underline{\quad}$

