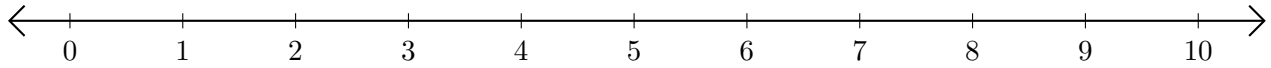


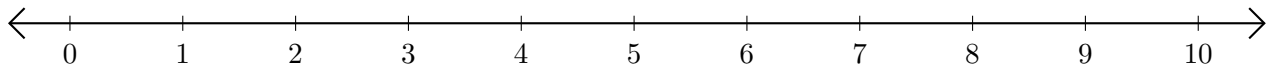
## Subtracting on Number Lines (E)

Use the number lines to calculate each difference.

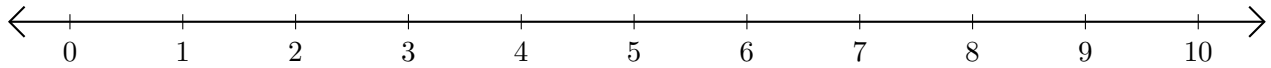
1.  $9 - 7 = \underline{\quad}$



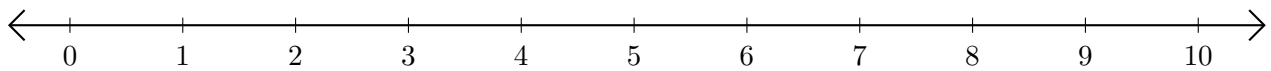
2.  $7 - 6 = \underline{\quad}$



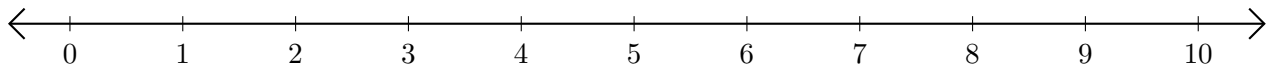
3.  $10 - 3 = \underline{\quad}$



4.  $10 - 4 = \underline{\quad}$



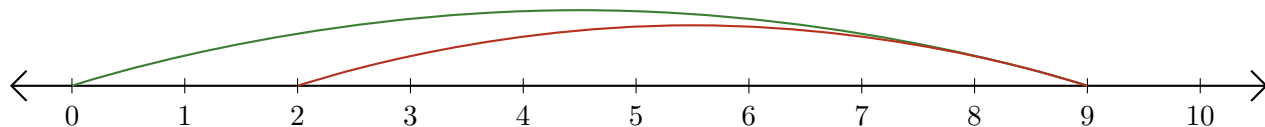
5.  $10 - 9 = \underline{\quad}$



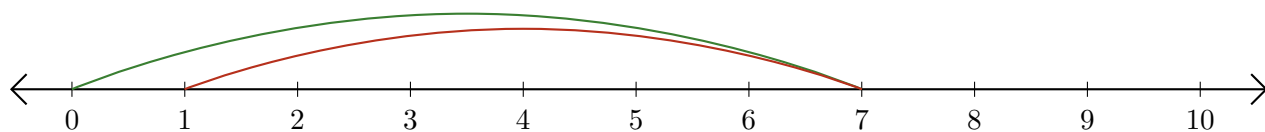
# Subtracting on Number Lines (E) Answers

Use the number lines to calculate each difference.

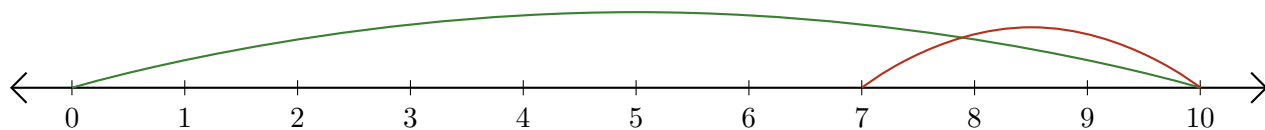
1.  $9 - 7 = \underline{2}$



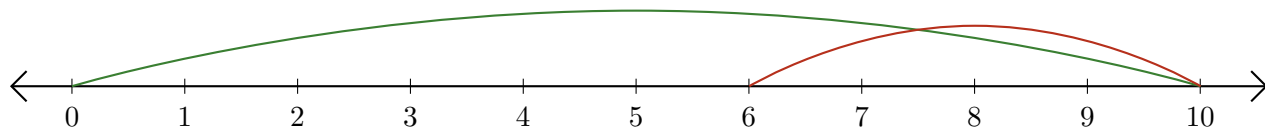
2.  $7 - 6 = \underline{1}$



3.  $10 - 3 = \underline{7}$



4.  $10 - 4 = \underline{6}$



5.  $10 - 9 = \underline{1}$

