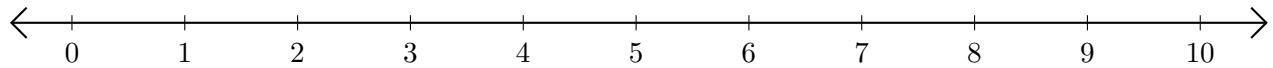


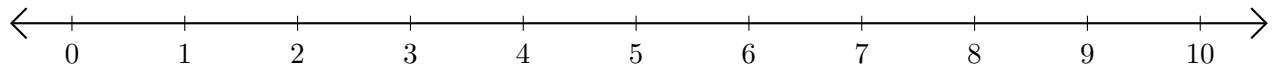
Subtracting on Number Lines (E)

Use the number lines to calculate each difference.

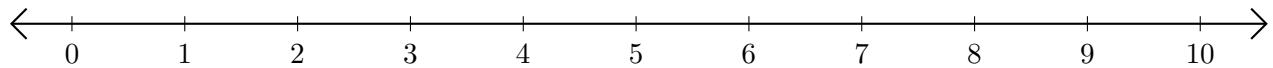
1. $9 - 7 = \underline{\quad}$



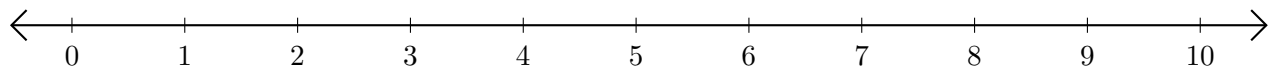
2. $7 - 6 = \underline{\quad}$



3. $10 - 3 = \underline{\quad}$



4. $10 - 4 = \underline{\quad}$



5. $10 - 9 = \underline{\quad}$

