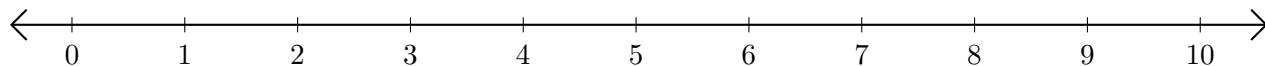


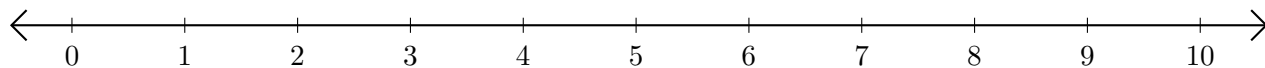
Subtracting on Number Lines (F)

Use the number lines to calculate each difference.

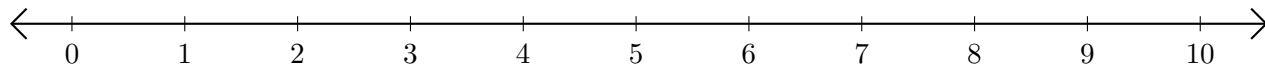
1. $9 - 7 = \underline{\quad}$



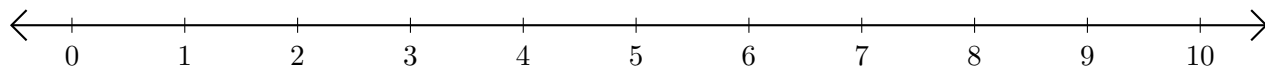
2. $10 - 8 = \underline{\quad}$



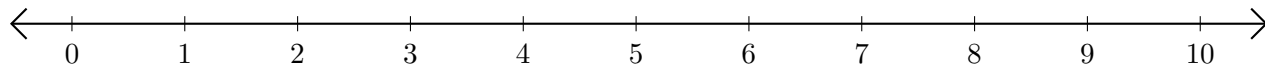
3. $7 - 1 = \underline{\quad}$



4. $7 - 5 = \underline{\quad}$



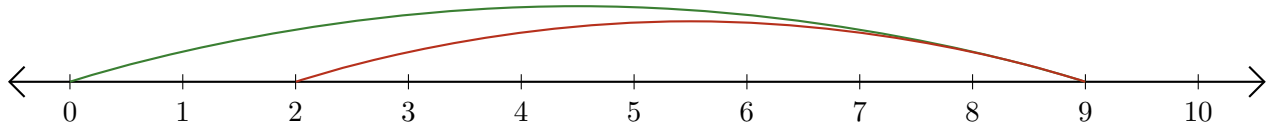
5. $10 - 2 = \underline{\quad}$



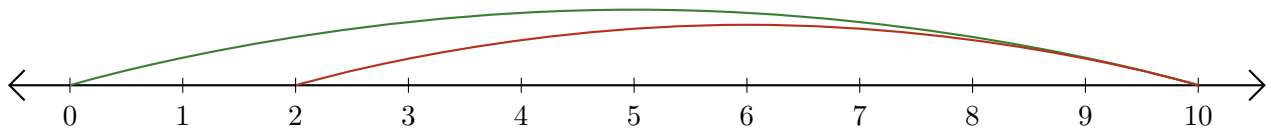
Subtracting on Number Lines (F) Answers

Use the number lines to calculate each difference.

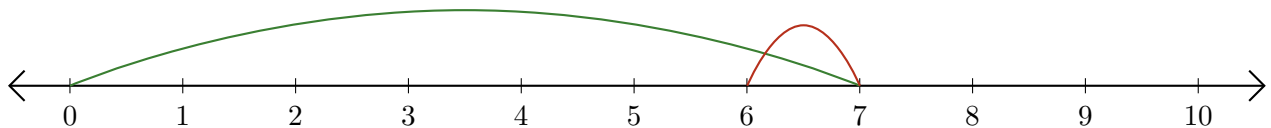
1. $9 - 7 = \underline{2}$



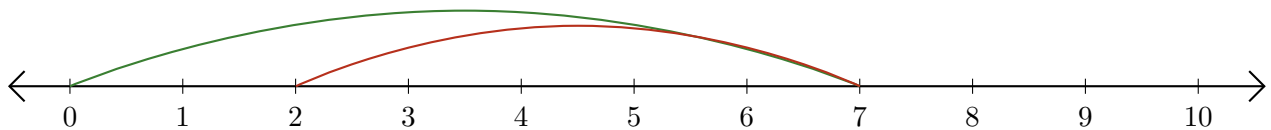
2. $10 - 8 = \underline{2}$



3. $7 - 1 = \underline{6}$



4. $7 - 5 = \underline{2}$



5. $10 - 2 = \underline{8}$

