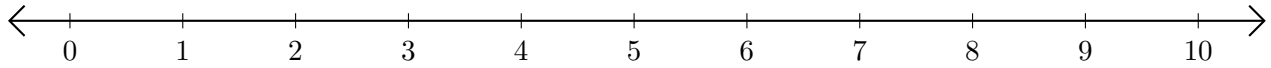


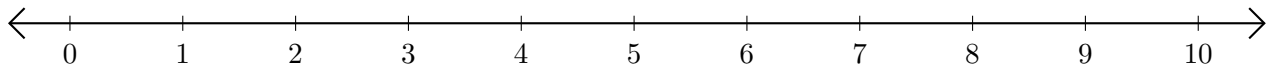
Subtracting on Number Lines (G)

Use the number lines to calculate each difference.

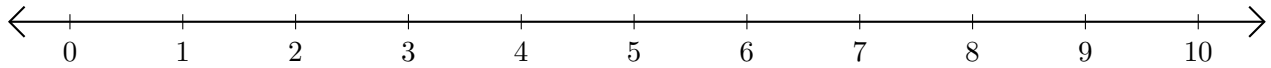
1. $10 - 9 = \underline{\quad}$



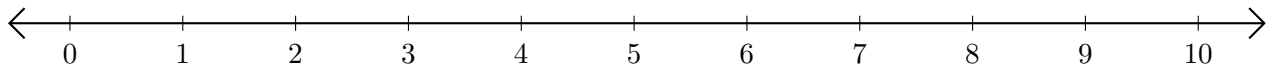
2. $4 - 2 = \underline{\quad}$



3. $10 - 8 = \underline{\quad}$



4. $10 - 7 = \underline{\quad}$



5. $5 - 4 = \underline{\quad}$

