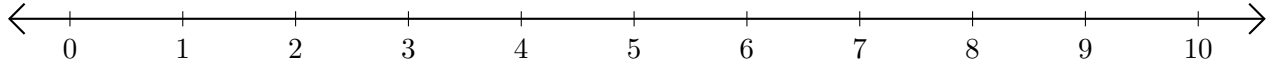


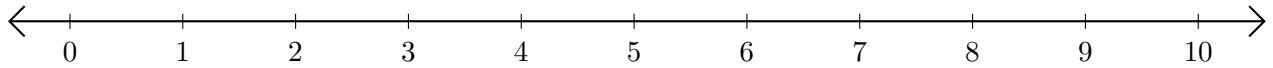
Subtracting on Number Lines (H)

Use the number lines to calculate each difference.

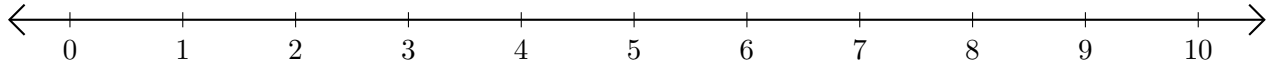
1. $10 - 5 = \underline{\quad}$



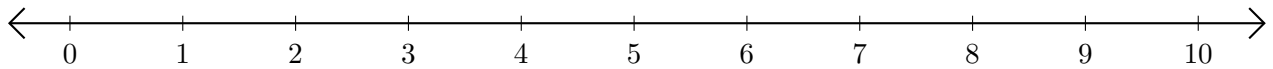
2. $5 - 1 = \underline{\quad}$



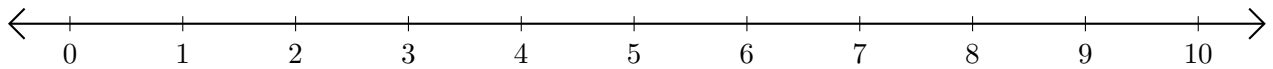
3. $9 - 6 = \underline{\quad}$



4. $10 - 9 = \underline{\quad}$



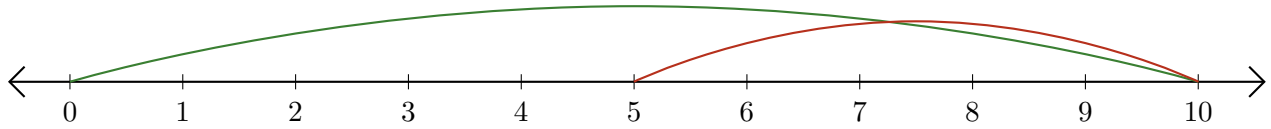
5. $9 - 8 = \underline{\quad}$



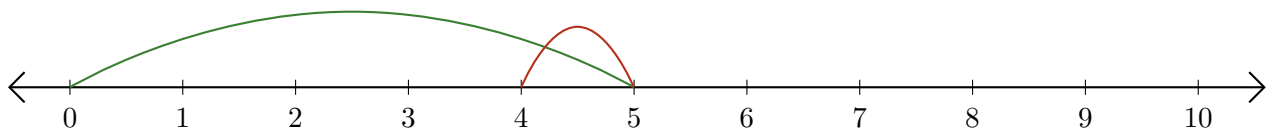
Subtracting on Number Lines (H) Answers

Use the number lines to calculate each difference.

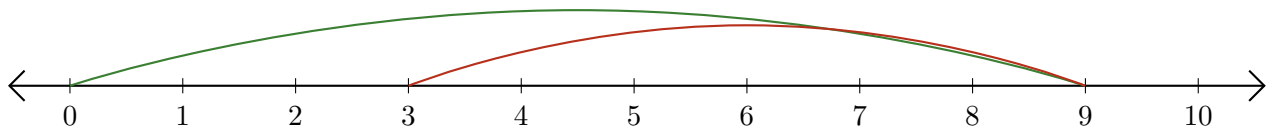
1. $10 - 5 = \underline{5}$



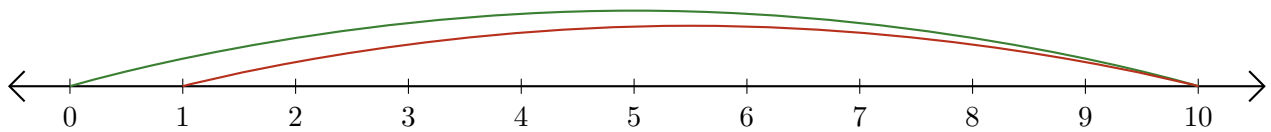
2. $5 - 1 = \underline{4}$



3. $9 - 6 = \underline{3}$



4. $10 - 9 = \underline{1}$



5. $9 - 8 = \underline{1}$

