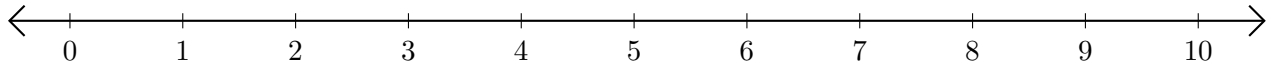


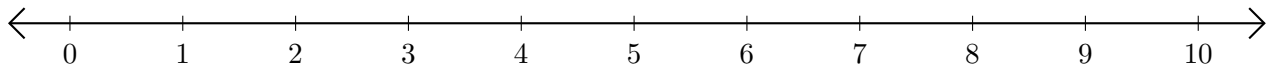
# Subtracting on Number Lines (H)

Use the number lines to calculate each difference.

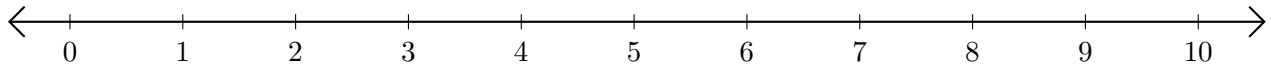
1.  $10 - 5 = \underline{\quad}$



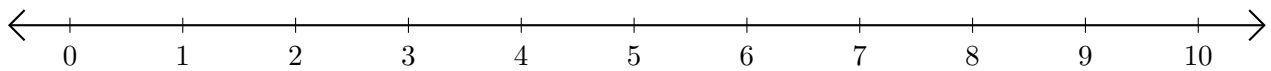
2.  $5 - 1 = \underline{\quad}$



3.  $9 - 6 = \underline{\quad}$



4.  $10 - 9 = \underline{\quad}$



5.  $9 - 8 = \underline{\quad}$

