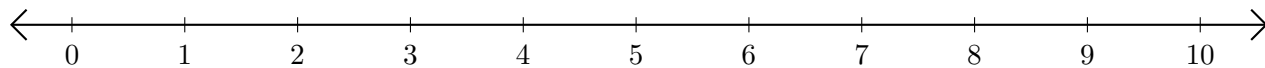


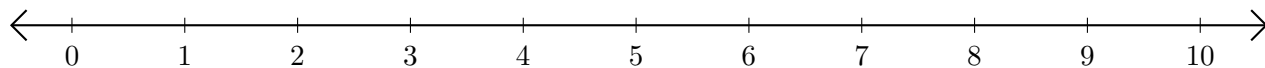
Subtracting on Number Lines (I)

Use the number lines to calculate each difference.

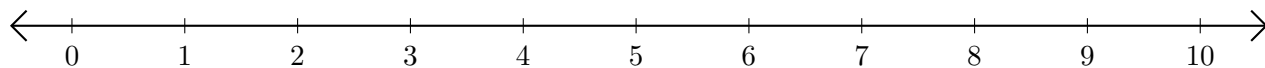
1. $9 - 7 = \underline{\quad}$



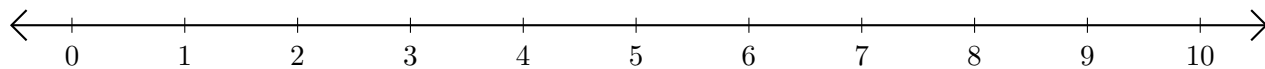
2. $6 - 3 = \underline{\quad}$



3. $7 - 1 = \underline{\quad}$



4. $6 - 5 = \underline{\quad}$



5. $10 - 9 = \underline{\quad}$

