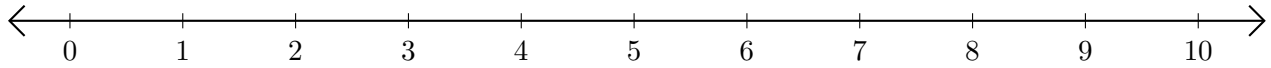


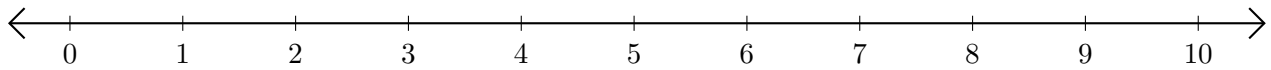
Subtracting on Number Lines (J)

Use the number lines to calculate each difference.

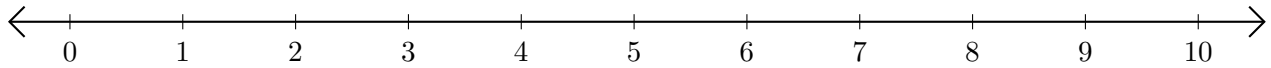
1. $9 - 4 = \underline{\quad}$



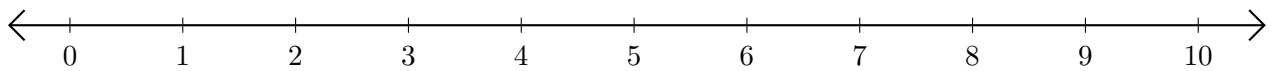
2. $6 - 1 = \underline{\quad}$



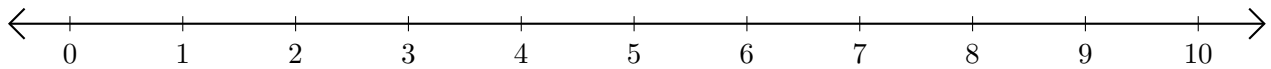
3. $10 - 8 = \underline{\quad}$



4. $8 - 3 = \underline{\quad}$



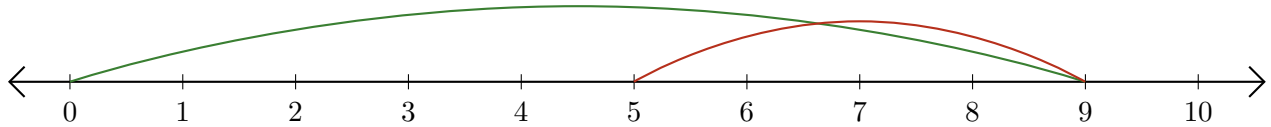
5. $8 - 5 = \underline{\quad}$



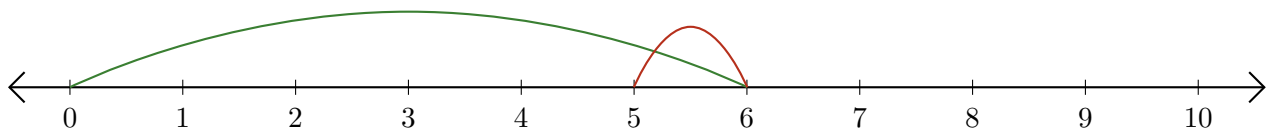
Subtracting on Number Lines (J) Answers

Use the number lines to calculate each difference.

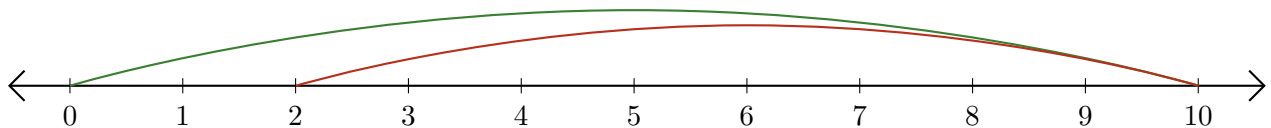
1. $9 - 4 = \underline{5}$



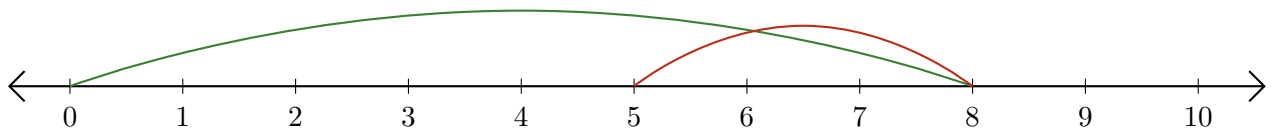
2. $6 - 1 = \underline{5}$



3. $10 - 8 = \underline{2}$



4. $8 - 3 = \underline{5}$



5. $8 - 5 = \underline{3}$

