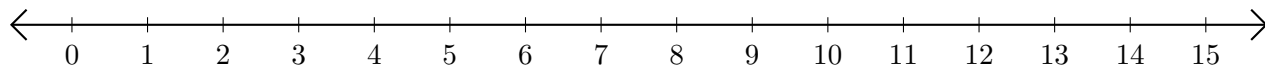


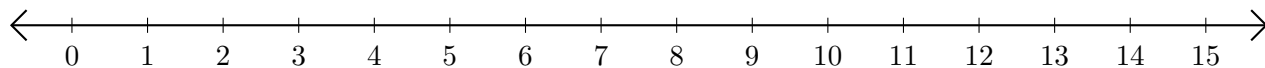
Subtracting on Number Lines (B)

Use the number lines to calculate each difference.

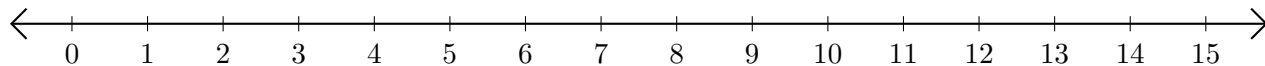
1. $15 - 14 = \underline{\quad}$



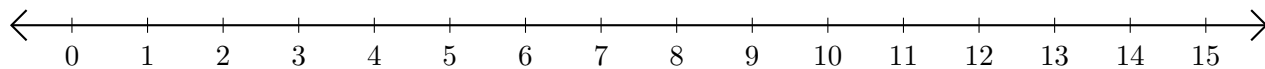
2. $8 - 7 = \underline{\quad}$



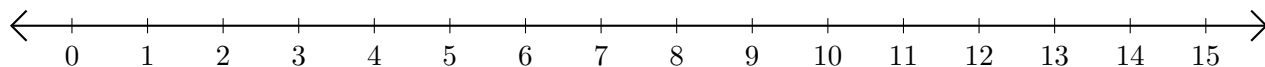
3. $12 - 6 = \underline{\quad}$



4. $15 - 13 = \underline{\quad}$



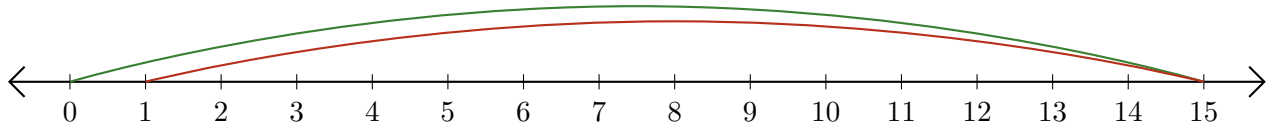
5. $13 - 8 = \underline{\quad}$



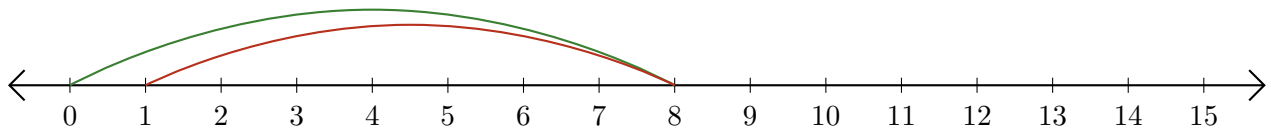
Subtracting on Number Lines (B) Answers

Use the number lines to calculate each difference.

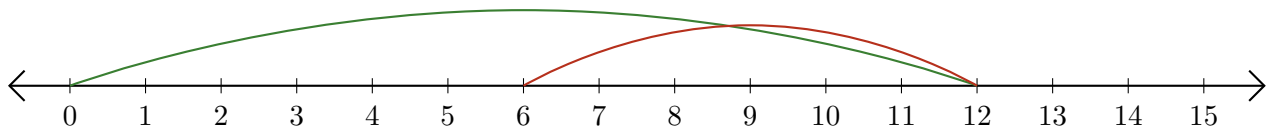
1. $15 - 14 = \underline{1}$



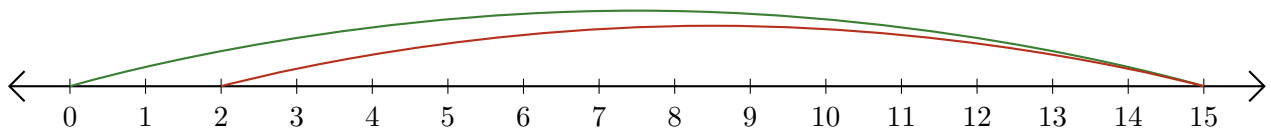
2. $8 - 7 = \underline{1}$



3. $12 - 6 = \underline{6}$



4. $15 - 13 = \underline{2}$



5. $13 - 8 = \underline{5}$

