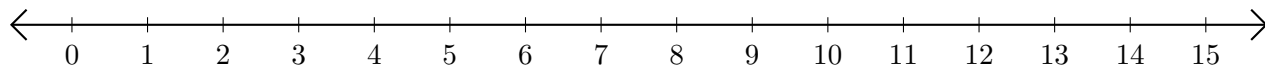


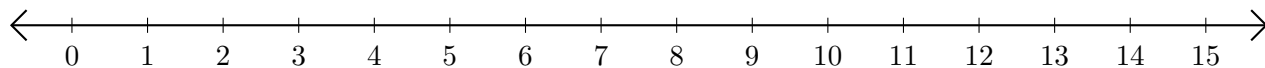
## Subtracting on Number Lines (B)

Use the number lines to calculate each difference.

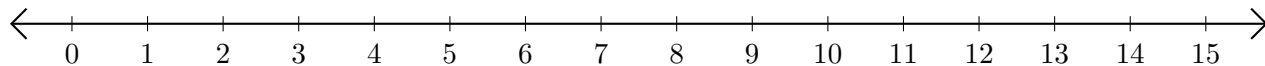
1.  $15 - 14 = \underline{\quad}$



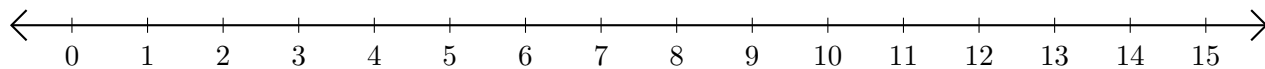
2.  $8 - 7 = \underline{\quad}$



3.  $12 - 6 = \underline{\quad}$



4.  $15 - 13 = \underline{\quad}$



5.  $13 - 8 = \underline{\quad}$

