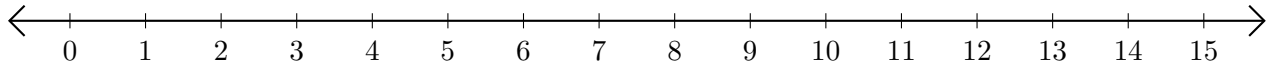


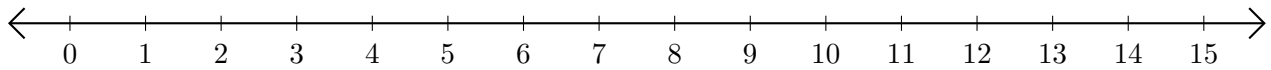
Subtracting on Number Lines (C)

Use the number lines to calculate each difference.

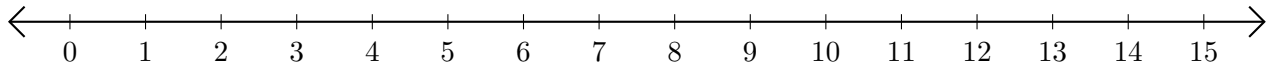
1. $13 - 7 = \underline{\quad}$



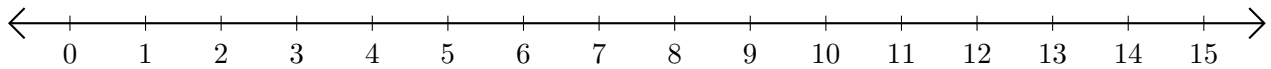
2. $14 - 11 = \underline{\quad}$



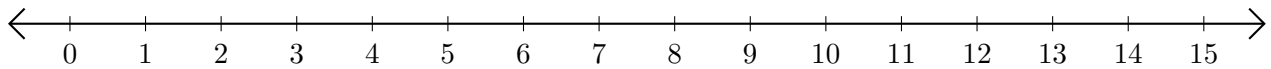
3. $14 - 10 = \underline{\quad}$



4. $8 - 5 = \underline{\quad}$



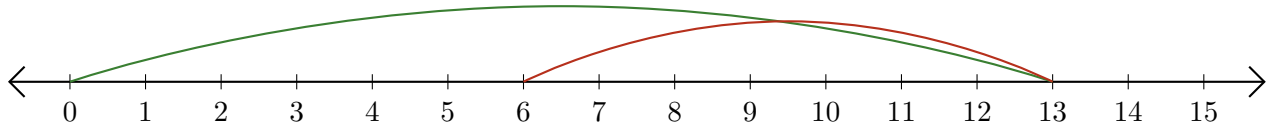
5. $8 - 4 = \underline{\quad}$



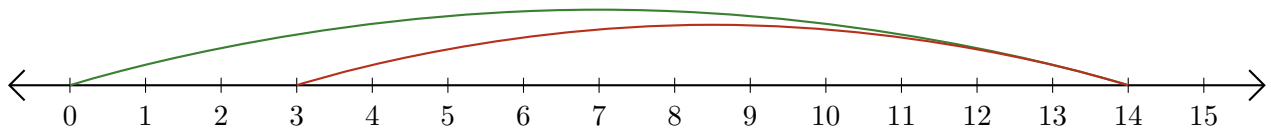
Subtracting on Number Lines (C) Answers

Use the number lines to calculate each difference.

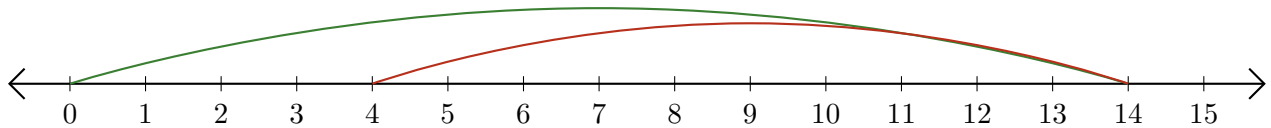
1. $13 - 7 = \underline{6}$



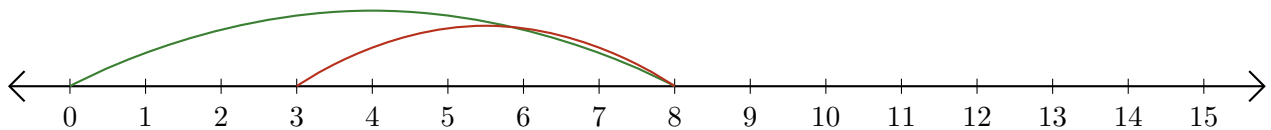
2. $14 - 11 = \underline{3}$



3. $14 - 10 = \underline{4}$



4. $8 - 5 = \underline{3}$



5. $8 - 4 = \underline{4}$

