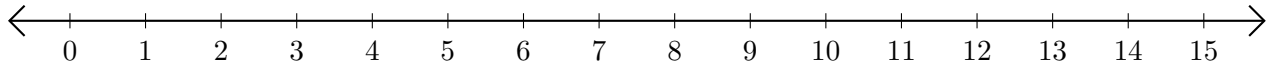


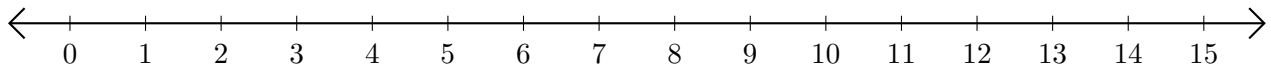
Subtracting on Number Lines (D)

Use the number lines to calculate each difference.

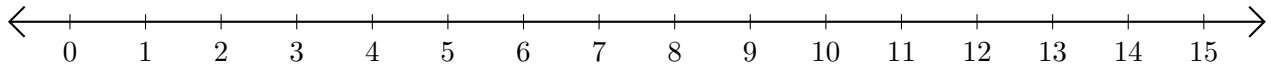
1. $11 - 3 = \underline{\quad}$



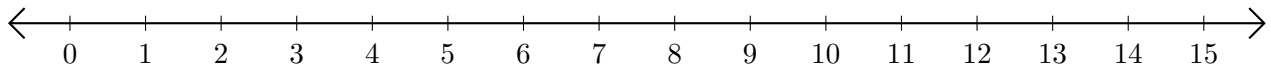
2. $9 - 2 = \underline{\quad}$



3. $7 - 6 = \underline{\quad}$



4. $15 - 13 = \underline{\quad}$



5. $13 - 8 = \underline{\quad}$

