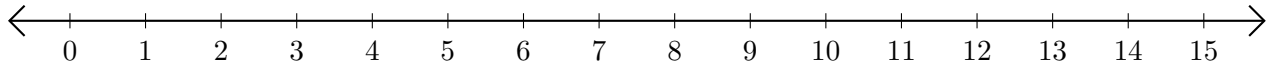


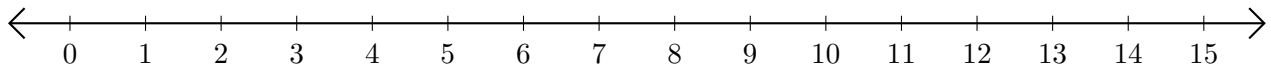
Subtracting on Number Lines (E)

Use the number lines to calculate each difference.

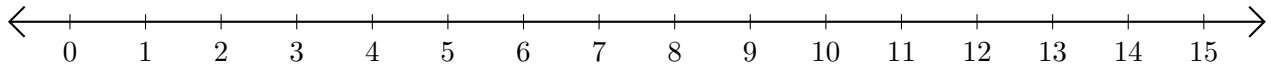
1. $7 - 4 = \underline{\quad}$



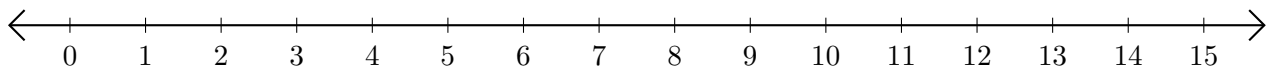
2. $12 - 6 = \underline{\quad}$



3. $9 - 8 = \underline{\quad}$



4. $14 - 9 = \underline{\quad}$



5. $15 - 14 = \underline{\quad}$

