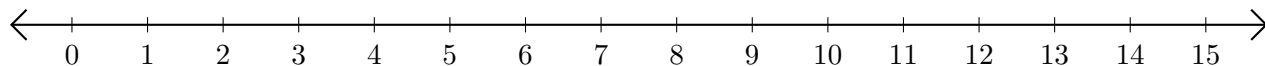


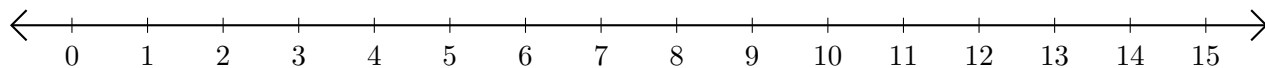
## Subtracting on Number Lines (F)

Use the number lines to calculate each difference.

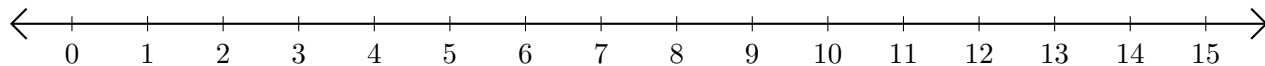
1.  $12 - 11 = \underline{\quad}$



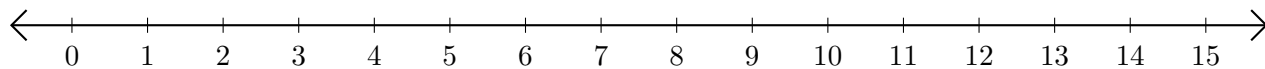
2.  $11 - 2 = \underline{\quad}$



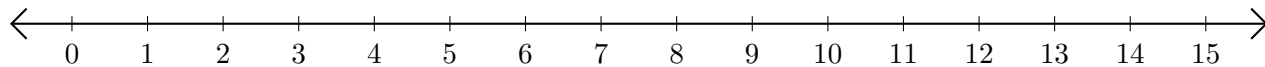
3.  $9 - 7 = \underline{\quad}$



4.  $12 - 10 = \underline{\quad}$



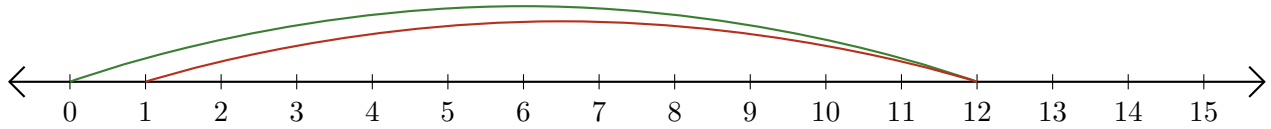
5.  $15 - 9 = \underline{\quad}$



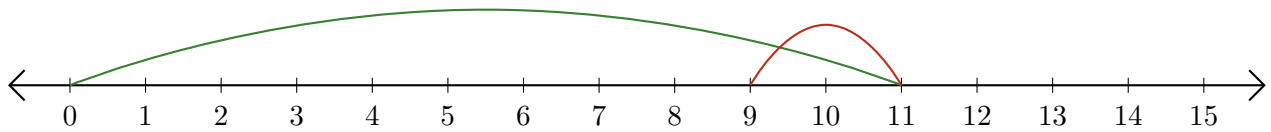
# Subtracting on Number Lines (F) Answers

Use the number lines to calculate each difference.

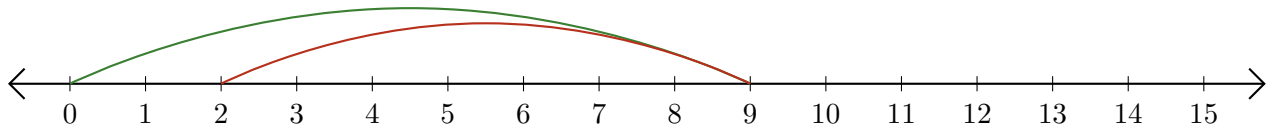
1.  $12 - 11 = \underline{1}$



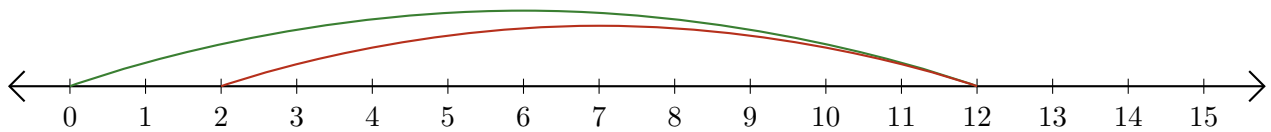
2.  $11 - 2 = \underline{9}$



3.  $9 - 7 = \underline{2}$



4.  $12 - 10 = \underline{2}$



5.  $15 - 9 = \underline{6}$

