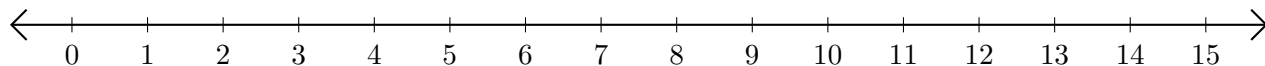


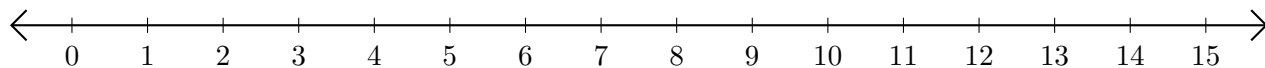
Subtracting on Number Lines (F)

Use the number lines to calculate each difference.

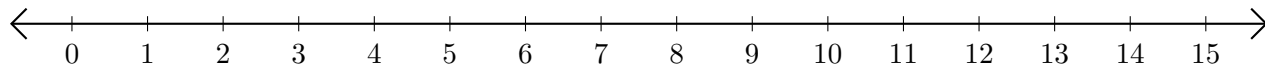
1. $12 - 11 = \underline{\quad}$



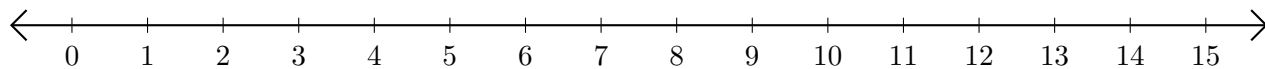
2. $11 - 2 = \underline{\quad}$



3. $9 - 7 = \underline{\quad}$



4. $12 - 10 = \underline{\quad}$



5. $15 - 9 = \underline{\quad}$

