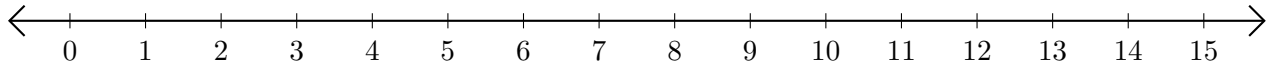


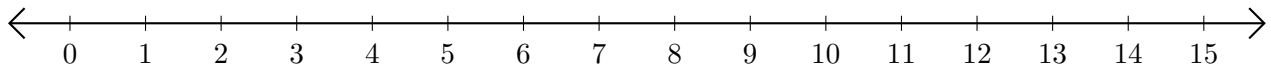
Subtracting on Number Lines (G)

Use the number lines to calculate each difference.

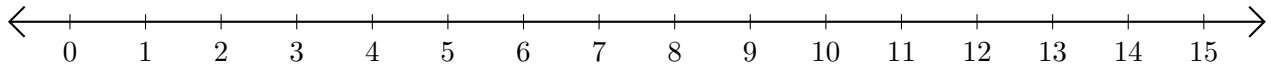
1. $13 - 7 = \underline{\quad}$



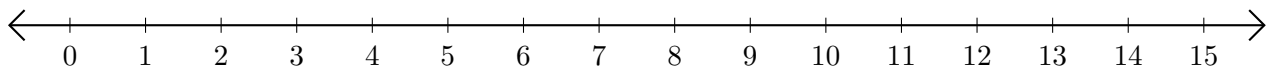
2. $14 - 8 = \underline{\quad}$



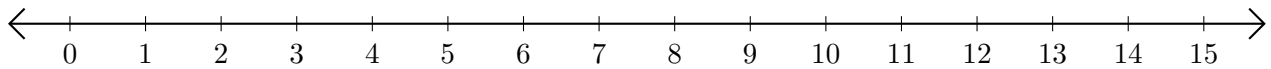
3. $9 - 2 = \underline{\quad}$



4. $11 - 6 = \underline{\quad}$



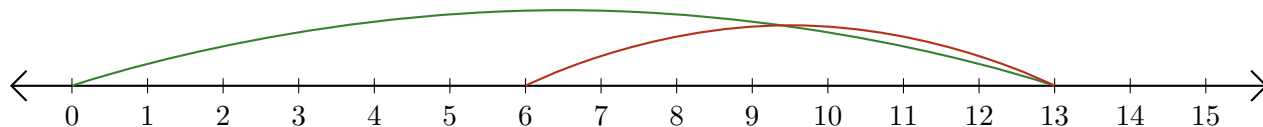
5. $14 - 5 = \underline{\quad}$



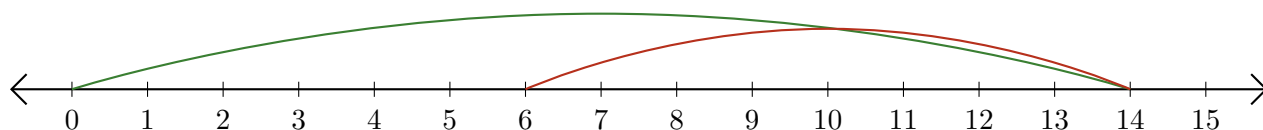
Subtracting on Number Lines (G) Answers

Use the number lines to calculate each difference.

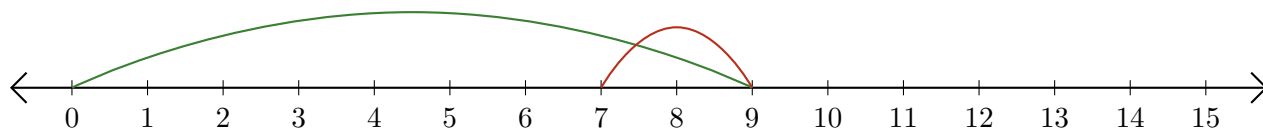
1. $13 - 7 = \underline{6}$



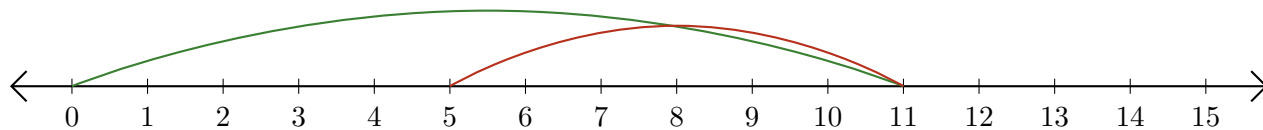
2. $14 - 8 = \underline{6}$



3. $9 - 2 = \underline{7}$



4. $11 - 6 = \underline{5}$



5. $14 - 5 = \underline{9}$

