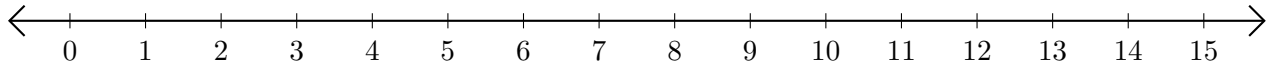


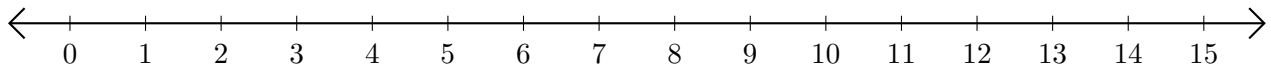
Subtracting on Number Lines (H)

Use the number lines to calculate each difference.

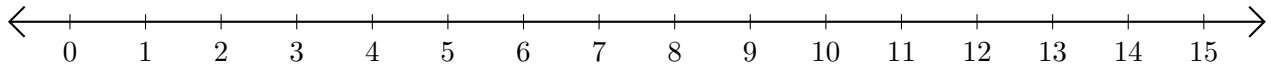
1. $15 - 3 = \underline{\quad}$



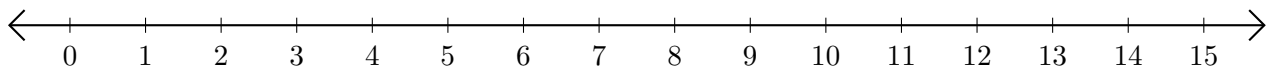
2. $12 - 8 = \underline{\quad}$



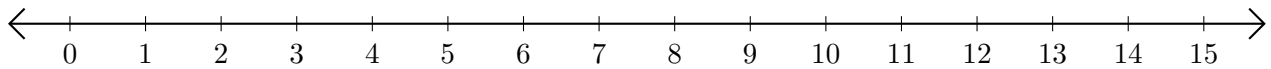
3. $13 - 10 = \underline{\quad}$



4. $13 - 6 = \underline{\quad}$



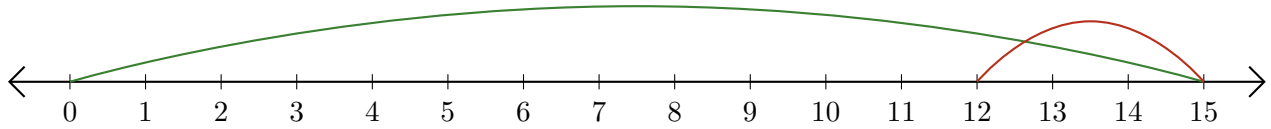
5. $15 - 14 = \underline{\quad}$



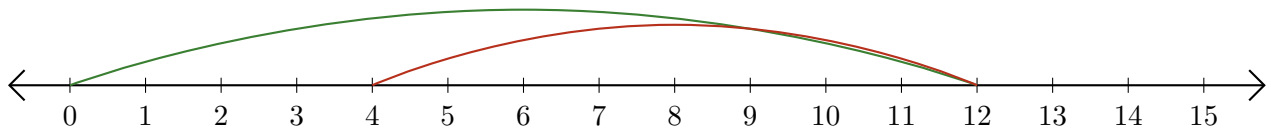
Subtracting on Number Lines (H) Answers

Use the number lines to calculate each difference.

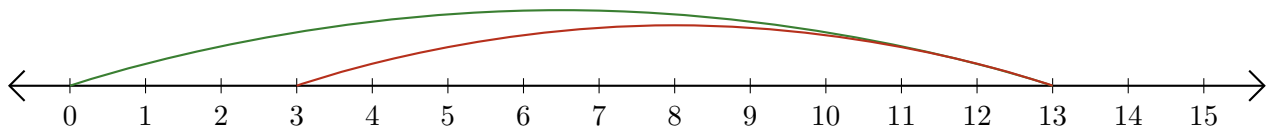
1. $15 - 3 = \underline{12}$



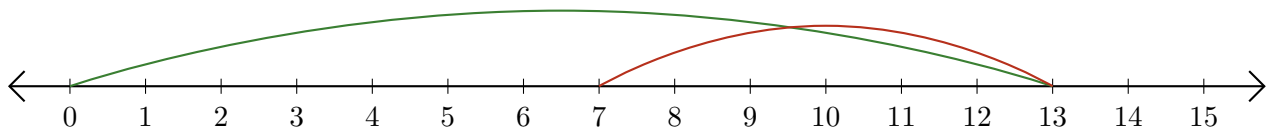
2. $12 - 8 = \underline{4}$



3. $13 - 10 = \underline{3}$



4. $13 - 6 = \underline{7}$



5. $15 - 14 = \underline{1}$

