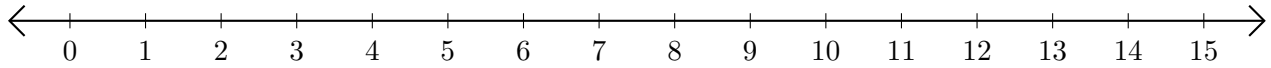


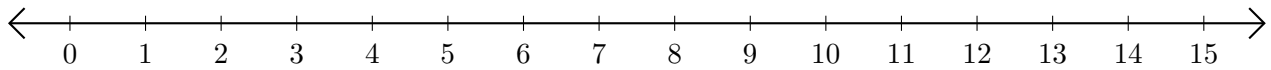
# Subtracting on Number Lines (H)

Use the number lines to calculate each difference.

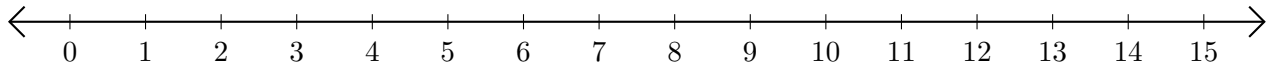
1.  $15 - 3 = \underline{\quad}$



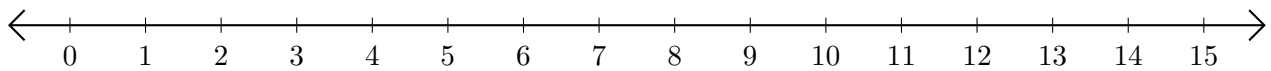
2.  $12 - 8 = \underline{\quad}$



3.  $13 - 10 = \underline{\quad}$



4.  $13 - 6 = \underline{\quad}$



5.  $15 - 14 = \underline{\quad}$

