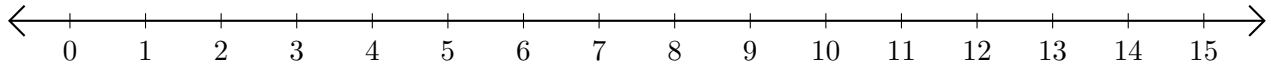


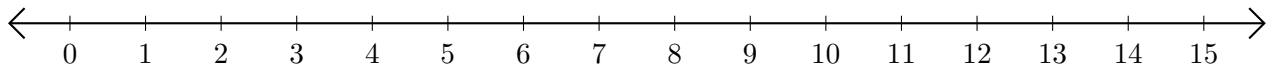
# Subtracting on Number Lines (J)

Use the number lines to calculate each difference.

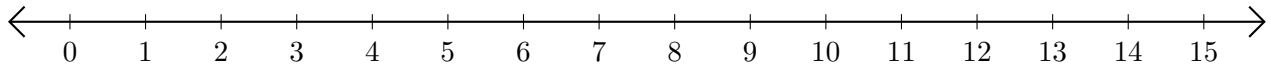
1.  $14 - 12 = \underline{\quad}$



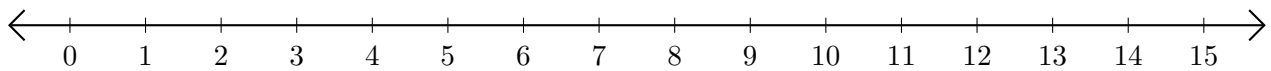
2.  $11 - 10 = \underline{\quad}$



3.  $15 - 14 = \underline{\quad}$



4.  $15 - 13 = \underline{\quad}$



5.  $4 - 2 = \underline{\quad}$

