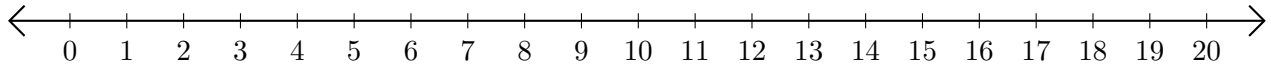


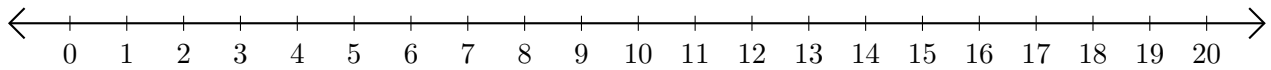
Subtracting on Number Lines (A)

Use the number lines to calculate each difference.

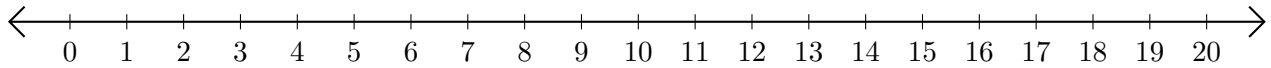
1. $19 - 6 = \underline{\quad}$



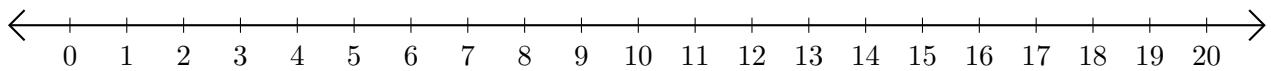
2. $18 - 4 = \underline{\quad}$



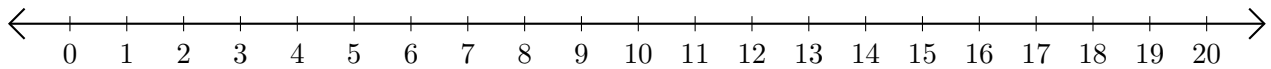
3. $20 - 19 = \underline{\quad}$



4. $19 - 18 = \underline{\quad}$



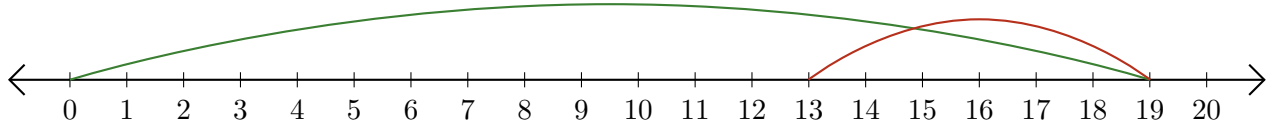
5. $14 - 9 = \underline{\quad}$



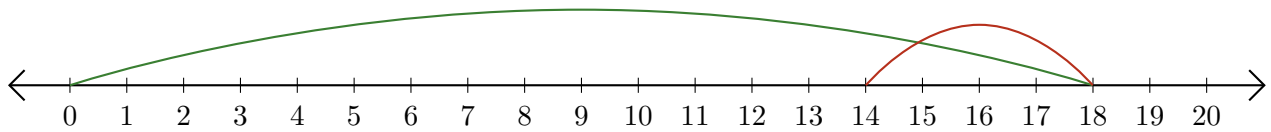
Subtracting on Number Lines (A) Answers

Use the number lines to calculate each difference.

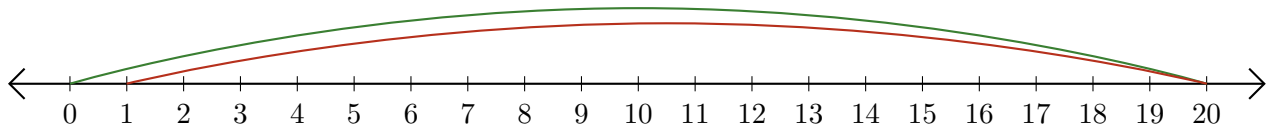
1. $19 - 6 = \underline{13}$



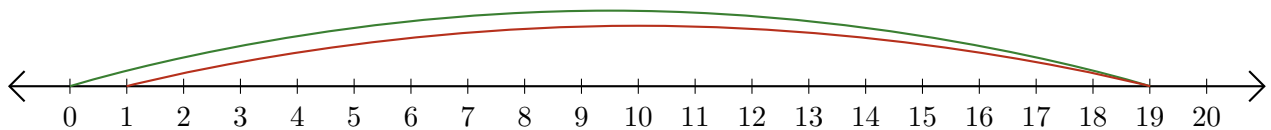
2. $18 - 4 = \underline{14}$



3. $20 - 19 = \underline{1}$



4. $19 - 18 = \underline{1}$



5. $14 - 9 = \underline{5}$

