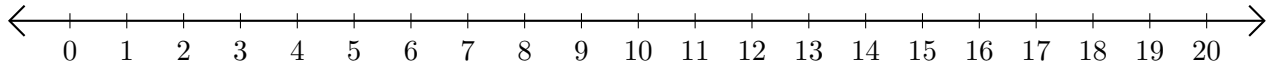


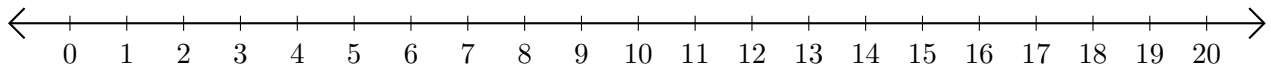
Subtracting on Number Lines (C)

Use the number lines to calculate each difference.

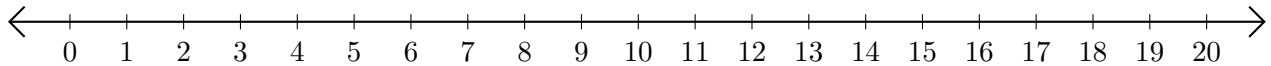
1. $20 - 18 = \underline{\quad}$



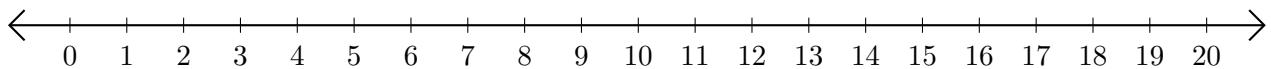
2. $12 - 3 = \underline{\quad}$



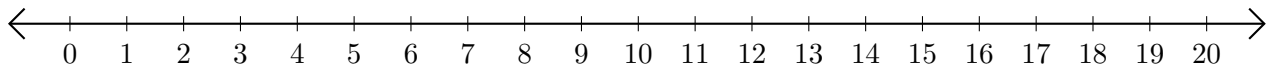
3. $17 - 14 = \underline{\quad}$



4. $18 - 13 = \underline{\quad}$



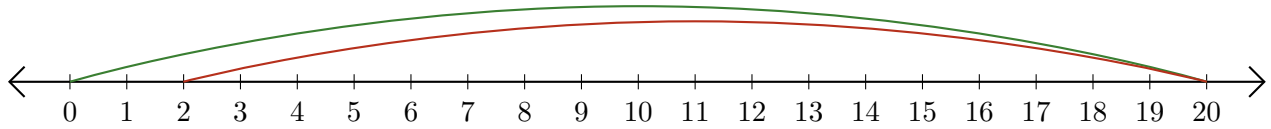
5. $18 - 8 = \underline{\quad}$



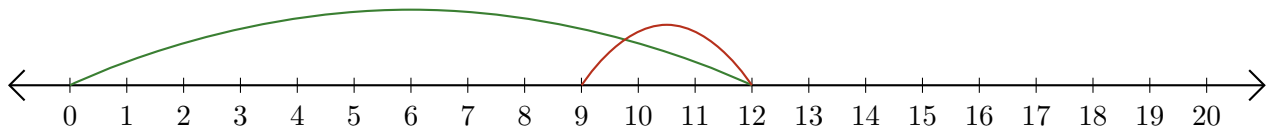
Subtracting on Number Lines (C) Answers

Use the number lines to calculate each difference.

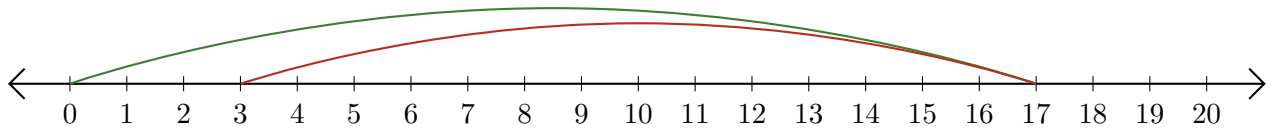
1. $20 - 18 = \underline{2}$



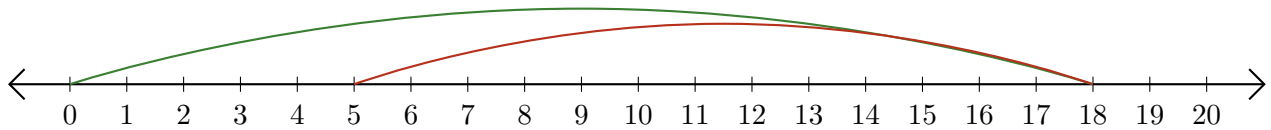
2. $12 - 3 = \underline{9}$



3. $17 - 14 = \underline{3}$



4. $18 - 13 = \underline{5}$



5. $18 - 8 = \underline{10}$

