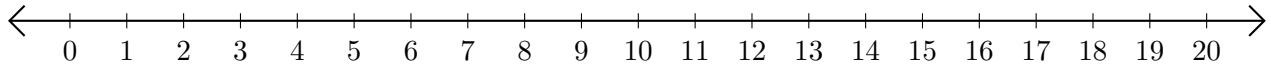


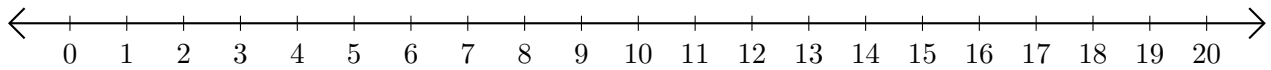
Subtracting on Number Lines (E)

Use the number lines to calculate each difference.

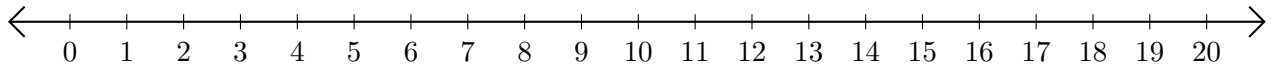
1. $15 - 9 = \underline{\quad}$



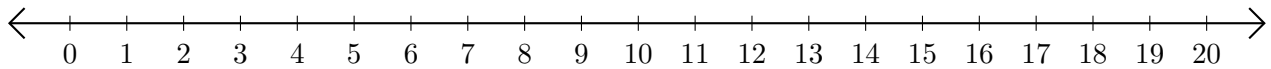
2. $18 - 15 = \underline{\quad}$



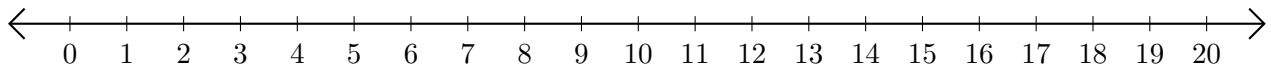
3. $20 - 16 = \underline{\quad}$



4. $11 - 6 = \underline{\quad}$



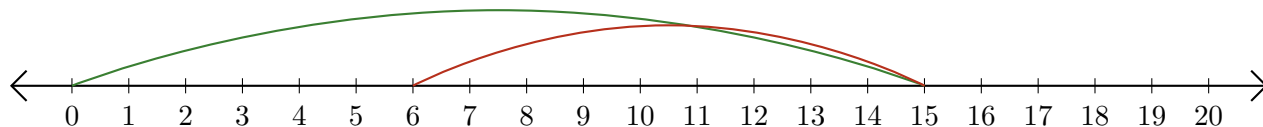
5. $10 - 7 = \underline{\quad}$



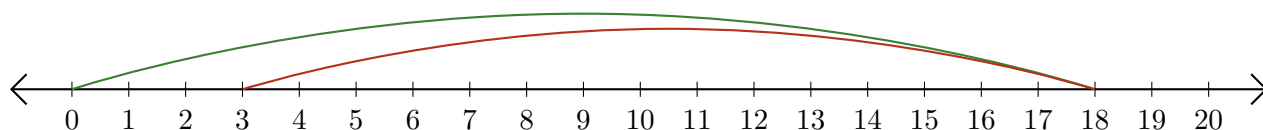
Subtracting on Number Lines (E) Answers

Use the number lines to calculate each difference.

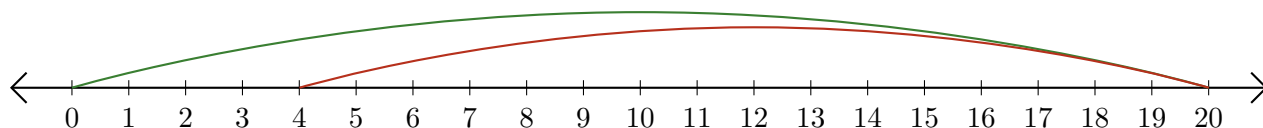
1. $15 - 9 = \underline{6}$



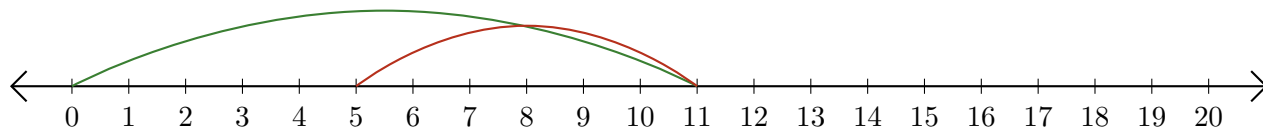
2. $18 - 15 = \underline{3}$



3. $20 - 16 = \underline{4}$



4. $11 - 6 = \underline{5}$



5. $10 - 7 = \underline{3}$

