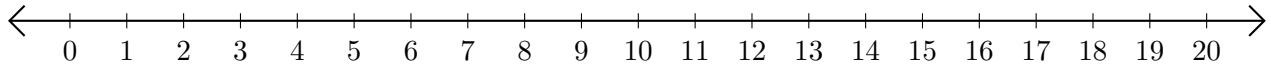


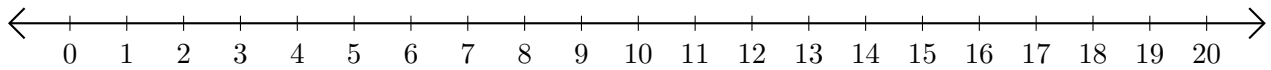
Subtracting on Number Lines (G)

Use the number lines to calculate each difference.

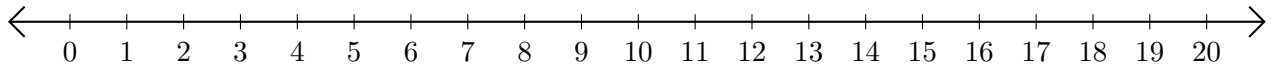
1. $18 - 9 = \underline{\quad}$



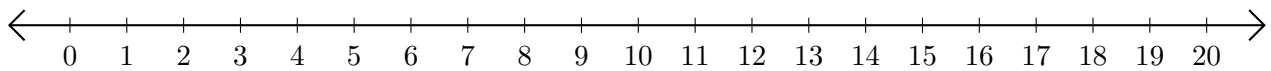
2. $18 - 8 = \underline{\quad}$



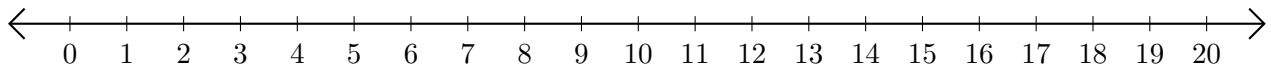
3. $8 - 2 = \underline{\quad}$



4. $16 - 10 = \underline{\quad}$



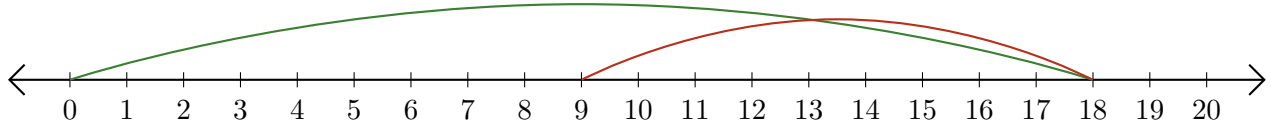
5. $19 - 14 = \underline{\quad}$



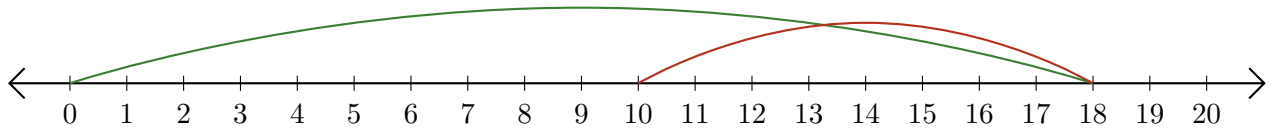
Subtracting on Number Lines (G) Answers

Use the number lines to calculate each difference.

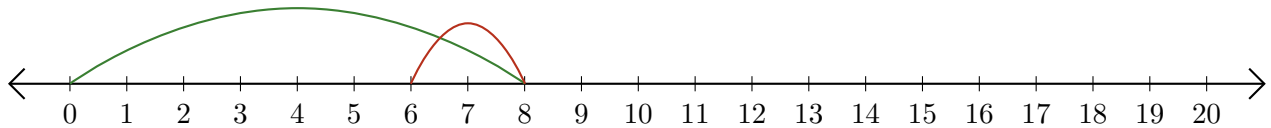
1. $18 - 9 = \underline{9}$



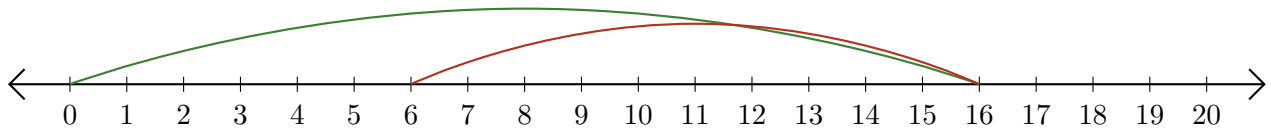
2. $18 - 8 = \underline{10}$



3. $8 - 2 = \underline{6}$



4. $16 - 10 = \underline{6}$



5. $19 - 14 = \underline{5}$

