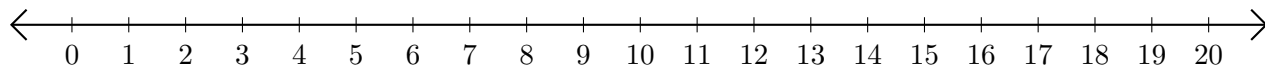


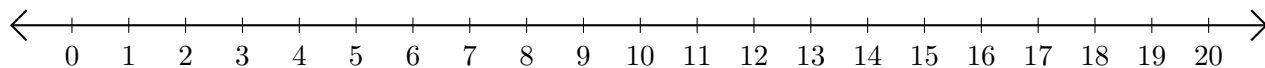
# Subtracting on Number Lines (I)

Use the number lines to calculate each difference.

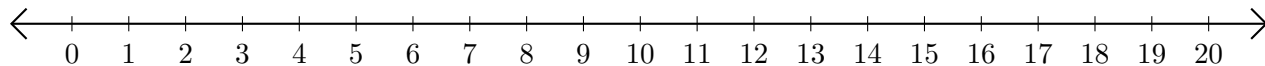
1.  $15 - 4 = \underline{\quad}$



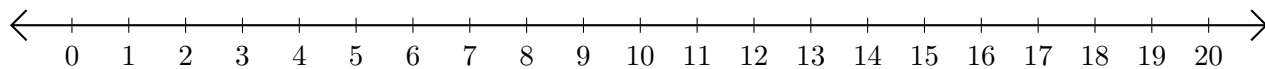
2.  $15 - 12 = \underline{\quad}$



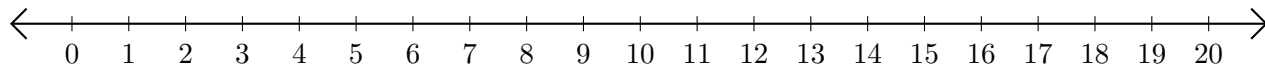
3.  $16 - 15 = \underline{\quad}$



4.  $17 - 5 = \underline{\quad}$



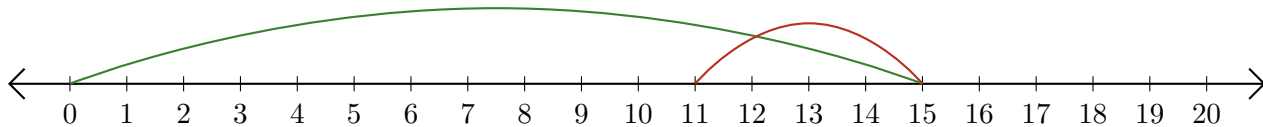
5.  $13 - 11 = \underline{\quad}$



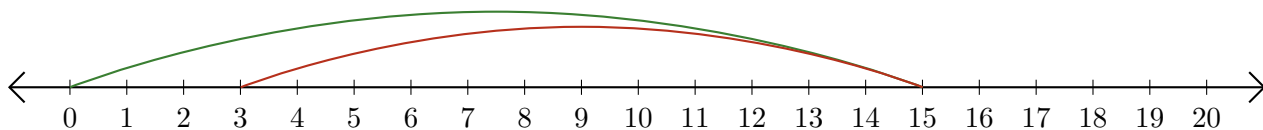
# Subtracting on Number Lines (I) Answers

Use the number lines to calculate each difference.

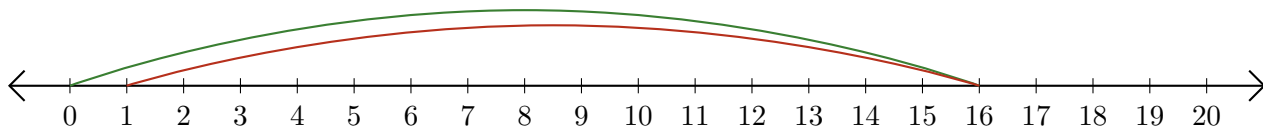
1.  $15 - 4 = \underline{11}$



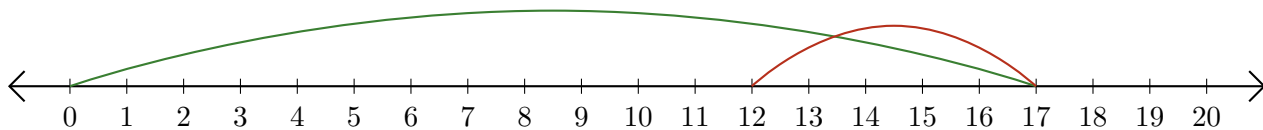
2.  $15 - 12 = \underline{3}$



3.  $16 - 15 = \underline{1}$



4.  $17 - 5 = \underline{12}$



5.  $13 - 11 = \underline{2}$

