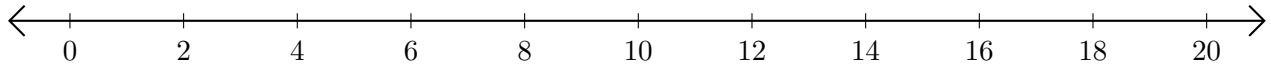


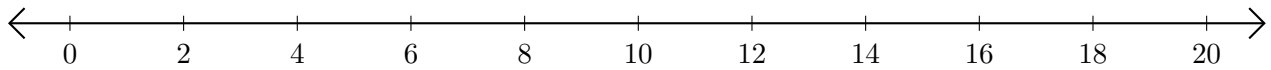
Subtracting on Number Lines (A)

Use the number lines to calculate each difference.

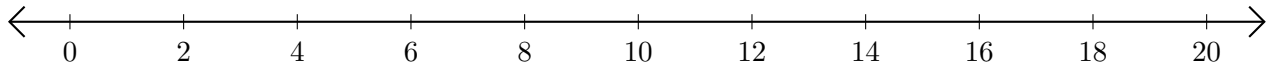
1. $16 - 4 = \underline{\quad}$



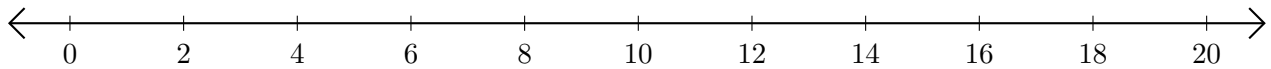
2. $18 - 12 = \underline{\quad}$



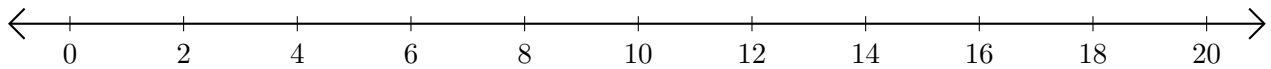
3. $14 - 10 = \underline{\quad}$



4. $14 - 2 = \underline{\quad}$



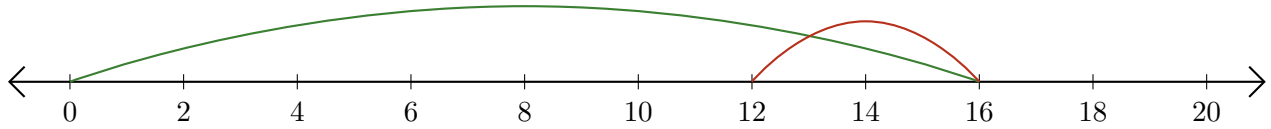
5. $10 - 6 = \underline{\quad}$



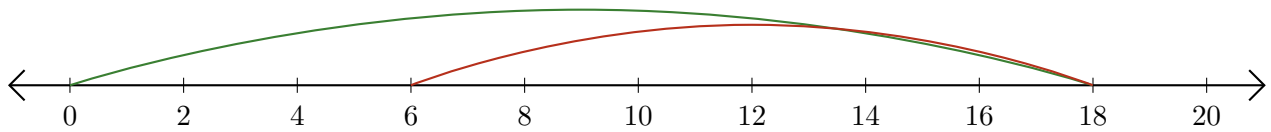
Subtracting on Number Lines (A) Answers

Use the number lines to calculate each difference.

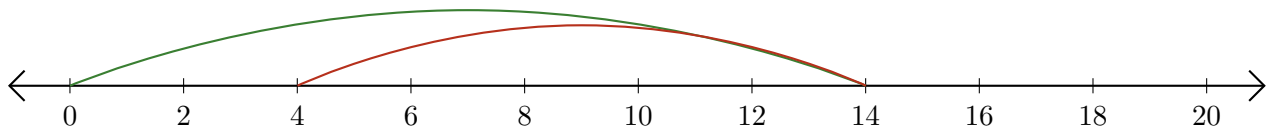
1. $16 - 4 = \underline{12}$



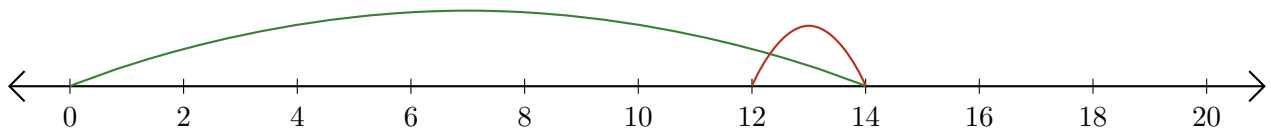
2. $18 - 12 = \underline{6}$



3. $14 - 10 = \underline{4}$



4. $14 - 2 = \underline{12}$



5. $10 - 6 = \underline{4}$

