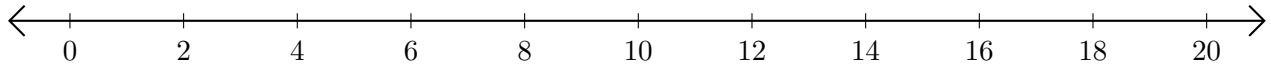


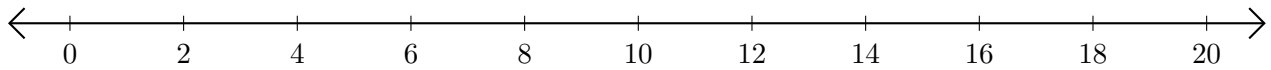
Subtracting on Number Lines (B)

Use the number lines to calculate each difference.

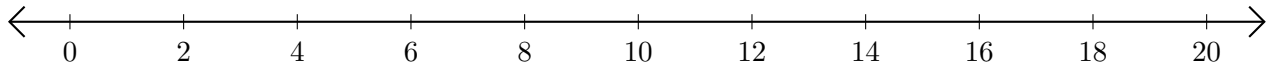
1. $16 - 10 = \underline{\quad}$



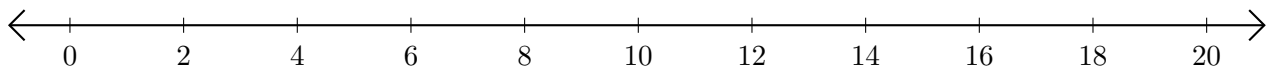
2. $20 - 18 = \underline{\quad}$



3. $18 - 14 = \underline{\quad}$



4. $20 - 8 = \underline{\quad}$



5. $14 - 12 = \underline{\quad}$

