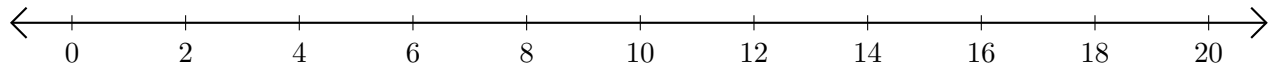


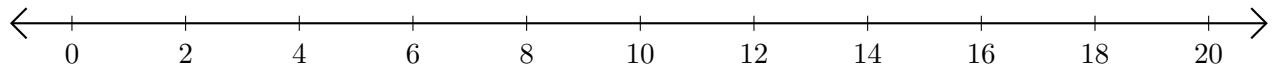
Subtracting on Number Lines (D)

Use the number lines to calculate each difference.

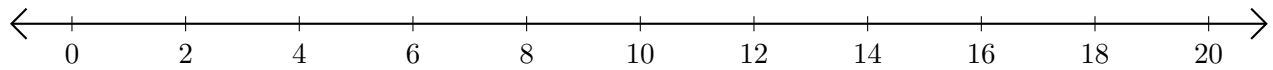
1. $16 - 12 = \underline{\quad}$



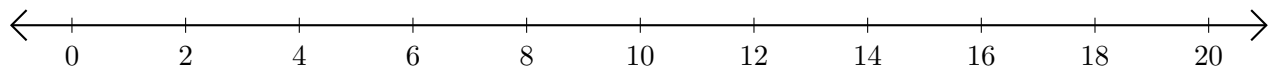
2. $8 - 4 = \underline{\quad}$



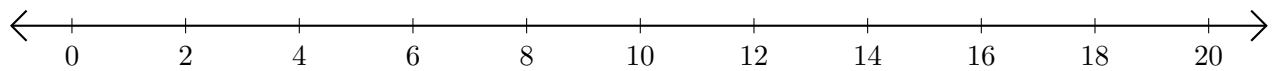
3. $12 - 2 = \underline{\quad}$



4. $12 - 10 = \underline{\quad}$



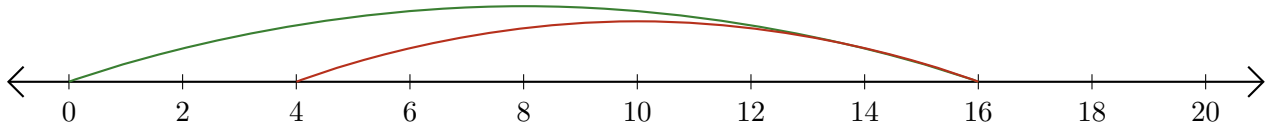
5. $10 - 6 = \underline{\quad}$



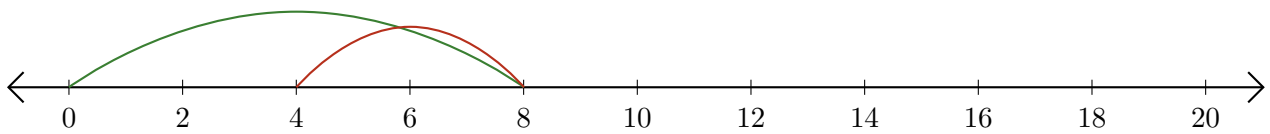
Subtracting on Number Lines (D) Answers

Use the number lines to calculate each difference.

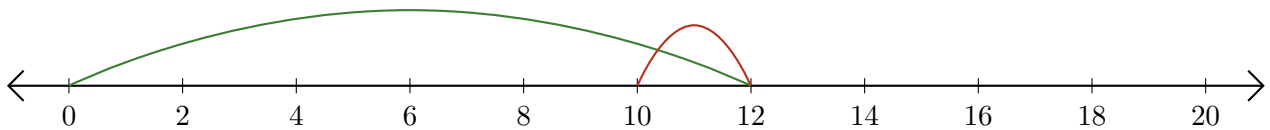
1. $16 - 12 = \underline{4}$



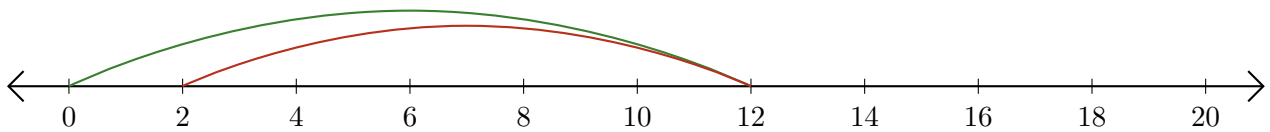
2. $8 - 4 = \underline{4}$



3. $12 - 2 = \underline{10}$



4. $12 - 10 = \underline{2}$



5. $10 - 6 = \underline{4}$

