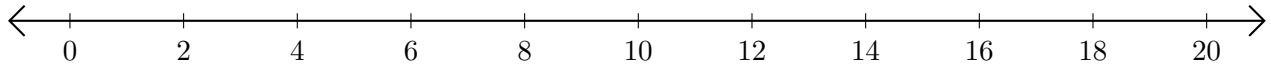


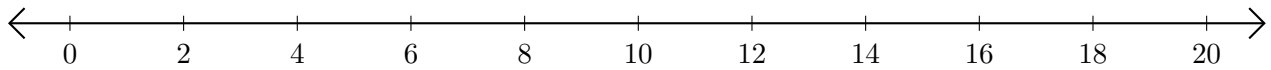
## Subtracting on Number Lines (D)

Use the number lines to calculate each difference.

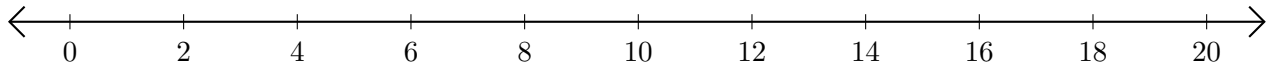
1.  $16 - 12 = \underline{\quad}$



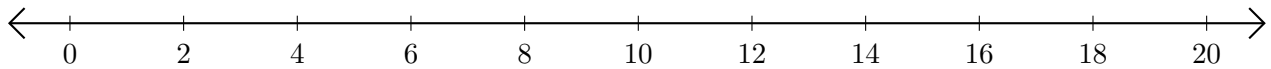
2.  $8 - 4 = \underline{\quad}$



3.  $12 - 2 = \underline{\quad}$



4.  $12 - 10 = \underline{\quad}$



5.  $10 - 6 = \underline{\quad}$

