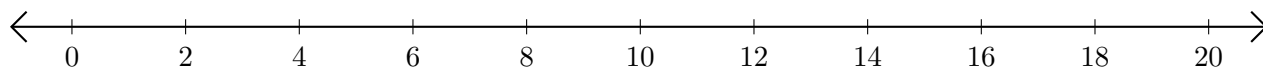


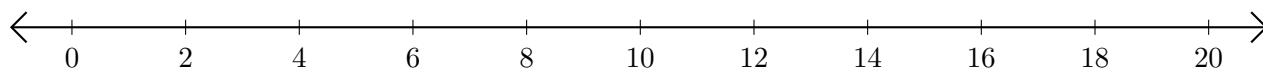
Subtracting on Number Lines (F)

Use the number lines to calculate each difference.

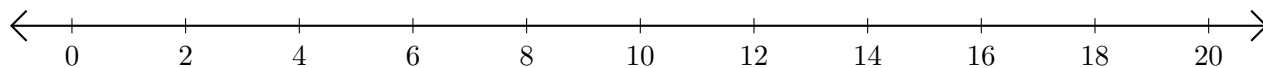
1. $6 - 2 = \underline{\quad}$



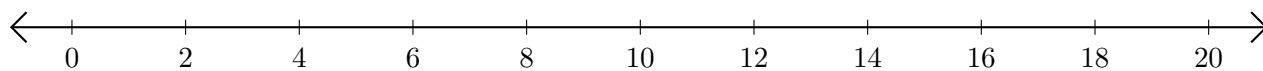
2. $16 - 10 = \underline{\quad}$



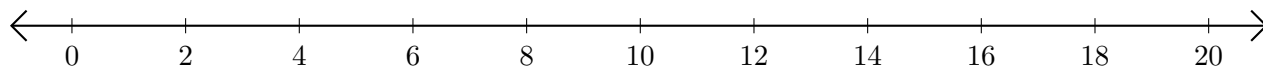
3. $10 - 8 = \underline{\quad}$



4. $18 - 14 = \underline{\quad}$



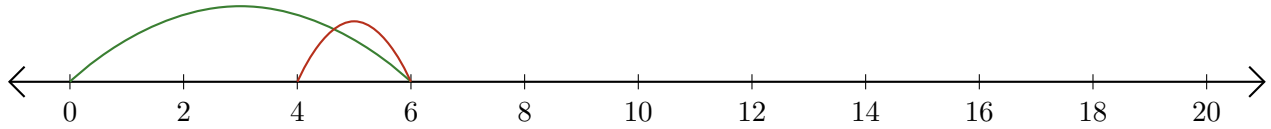
5. $20 - 4 = \underline{\quad}$



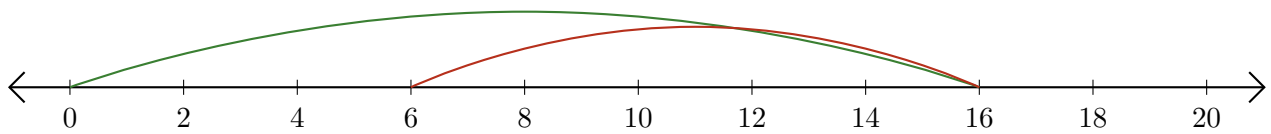
Subtracting on Number Lines (F) Answers

Use the number lines to calculate each difference.

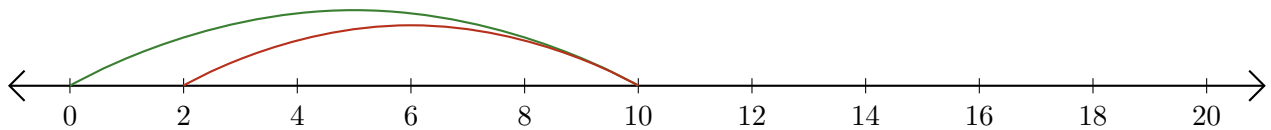
1. $6 - 2 = \underline{4}$



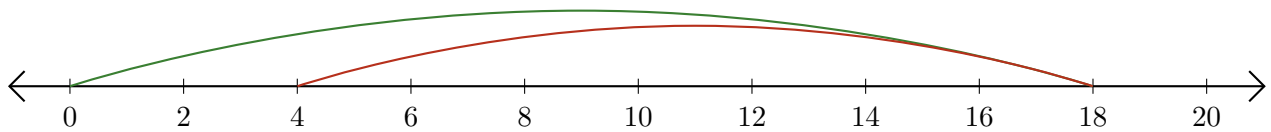
2. $16 - 10 = \underline{6}$



3. $10 - 8 = \underline{2}$



4. $18 - 14 = \underline{4}$



5. $20 - 4 = \underline{16}$

