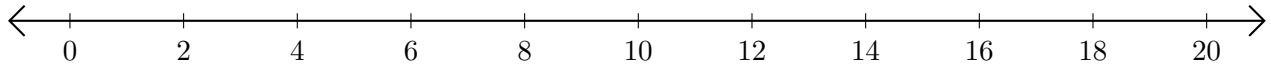


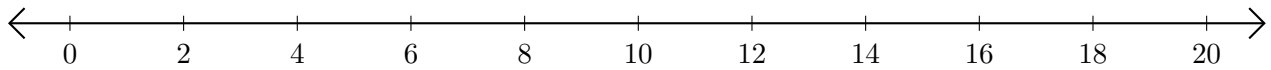
Subtracting on Number Lines (G)

Use the number lines to calculate each difference.

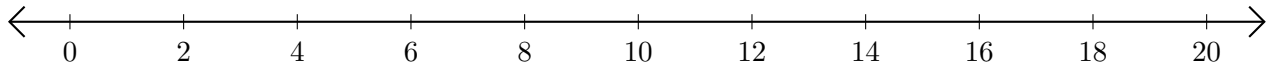
1. $14 - 12 = \underline{\quad}$



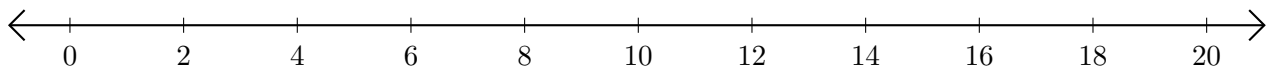
2. $20 - 16 = \underline{\quad}$



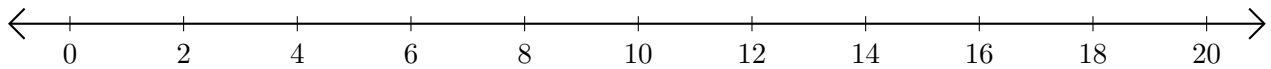
3. $12 - 10 = \underline{\quad}$



4. $16 - 14 = \underline{\quad}$



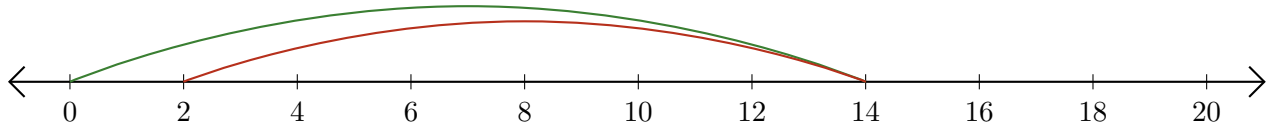
5. $10 - 8 = \underline{\quad}$



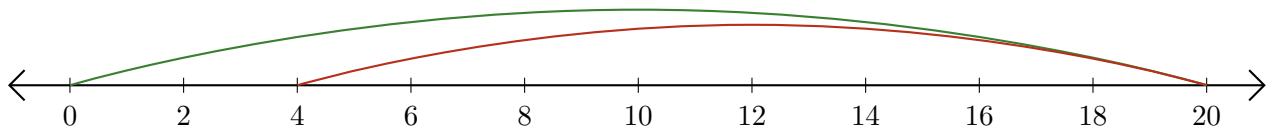
Subtracting on Number Lines (G) Answers

Use the number lines to calculate each difference.

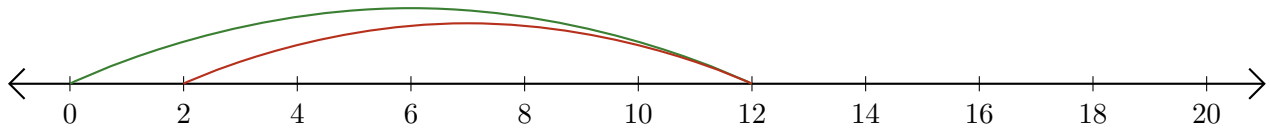
1. $14 - 12 = \underline{2}$



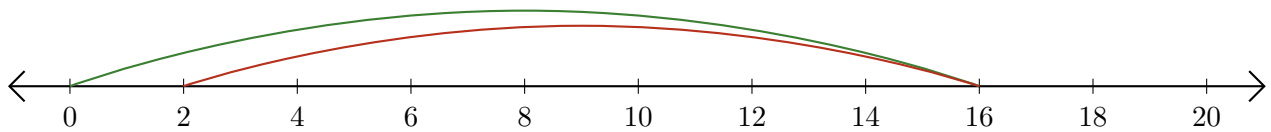
2. $20 - 16 = \underline{4}$



3. $12 - 10 = \underline{2}$



4. $16 - 14 = \underline{2}$



5. $10 - 8 = \underline{2}$

