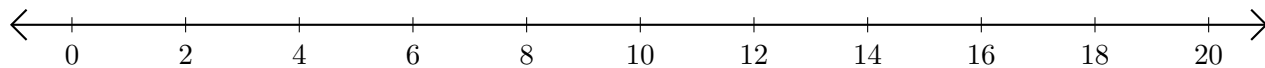


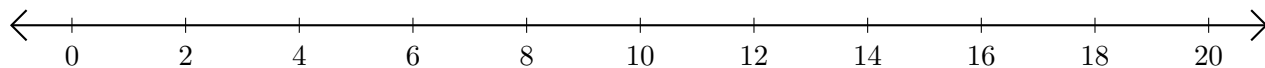
## Subtracting on Number Lines (G)

Use the number lines to calculate each difference.

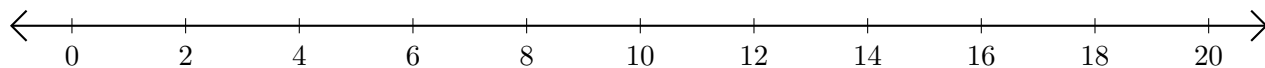
1.  $14 - 12 = \underline{\quad}$



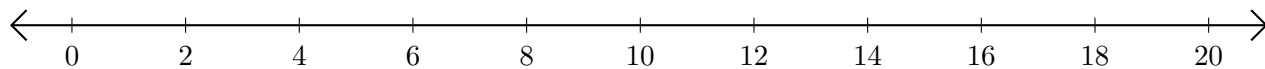
2.  $20 - 16 = \underline{\quad}$



3.  $12 - 10 = \underline{\quad}$



4.  $16 - 14 = \underline{\quad}$



5.  $10 - 8 = \underline{\quad}$

