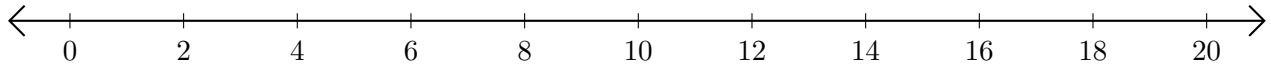


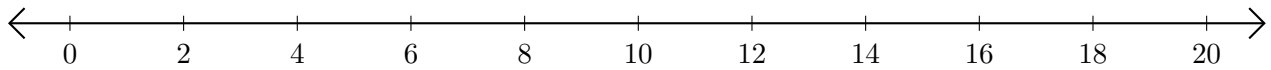
# Subtracting on Number Lines (H)

Use the number lines to calculate each difference.

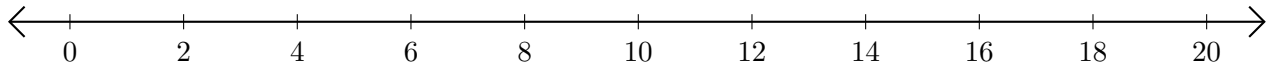
1.  $20 - 2 = \underline{\quad}$



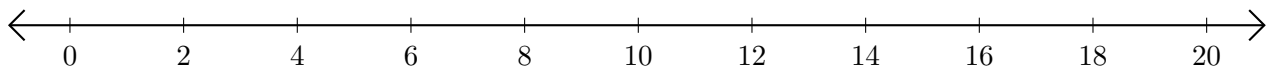
2.  $12 - 10 = \underline{\quad}$



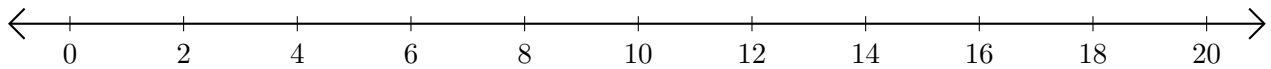
3.  $16 - 12 = \underline{\quad}$



4.  $18 - 16 = \underline{\quad}$



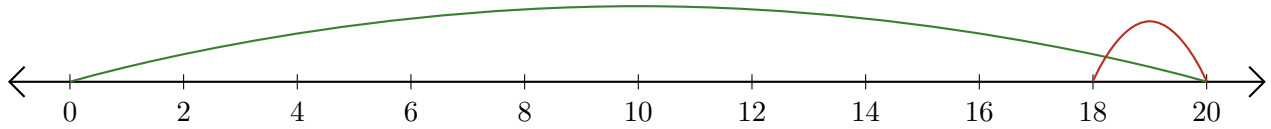
5.  $14 - 8 = \underline{\quad}$



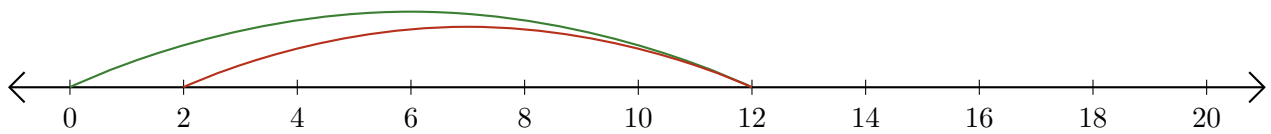
# Subtracting on Number Lines (H) Answers

Use the number lines to calculate each difference.

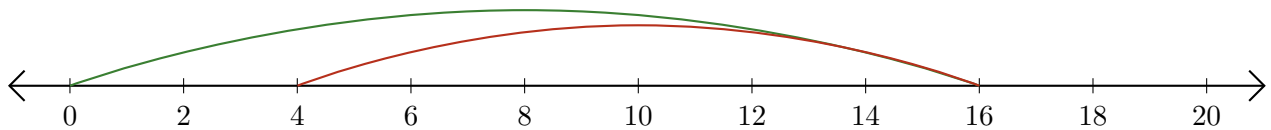
1.  $20 - 2 = \underline{18}$



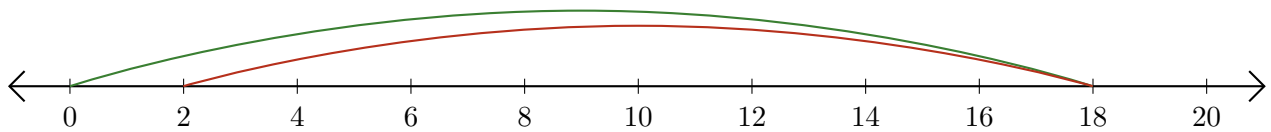
2.  $12 - 10 = \underline{2}$



3.  $16 - 12 = \underline{4}$



4.  $18 - 16 = \underline{2}$



5.  $14 - 8 = \underline{6}$

