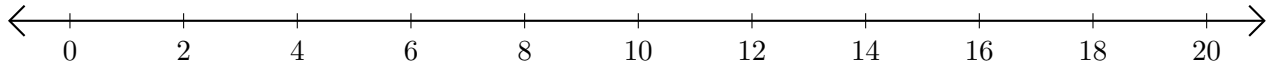


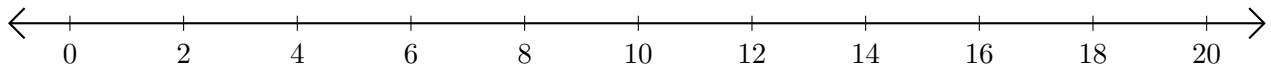
Subtracting on Number Lines (H)

Use the number lines to calculate each difference.

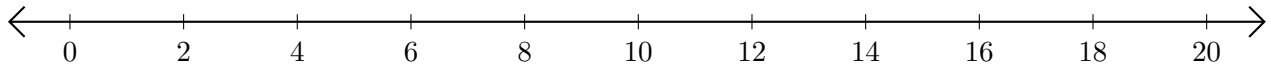
1. $20 - 2 = \underline{\quad}$



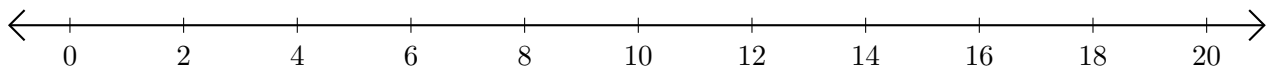
2. $12 - 10 = \underline{\quad}$



3. $16 - 12 = \underline{\quad}$



4. $18 - 16 = \underline{\quad}$



5. $14 - 8 = \underline{\quad}$

