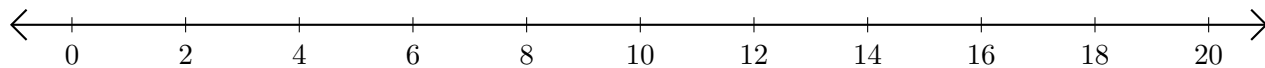


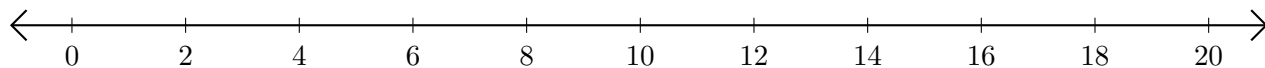
Subtracting on Number Lines (I)

Use the number lines to calculate each difference.

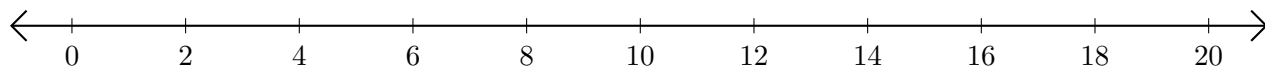
1. $20 - 6 = \underline{\quad}$



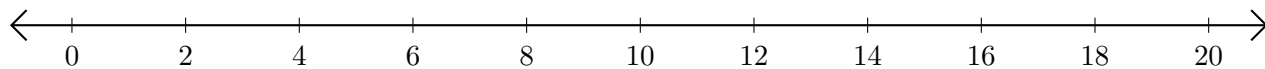
2. $18 - 16 = \underline{\quad}$



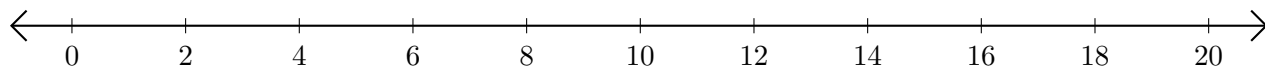
3. $4 - 2 = \underline{\quad}$



4. $20 - 18 = \underline{\quad}$



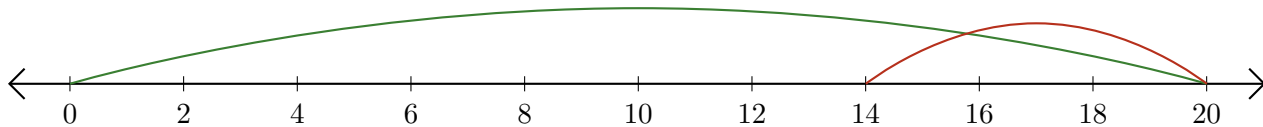
5. $14 - 8 = \underline{\quad}$



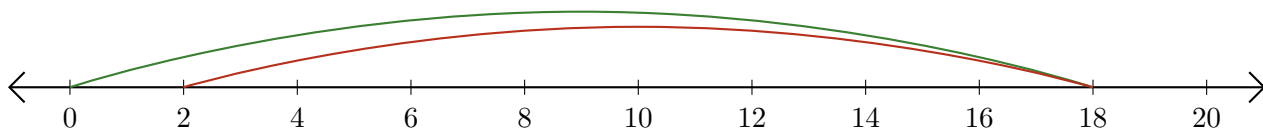
Subtracting on Number Lines (I) Answers

Use the number lines to calculate each difference.

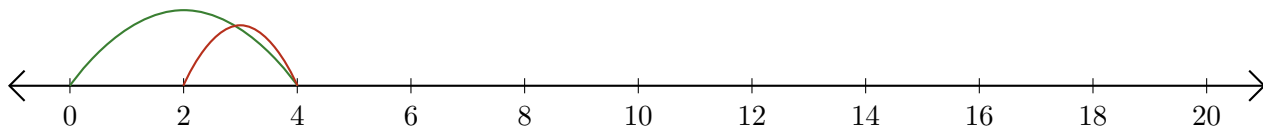
1. $20 - 6 = \underline{14}$



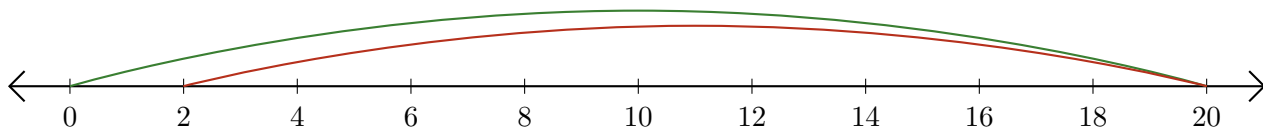
2. $18 - 16 = \underline{2}$



3. $4 - 2 = \underline{2}$



4. $20 - 18 = \underline{2}$



5. $14 - 8 = \underline{6}$

