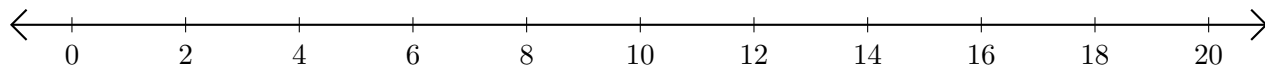


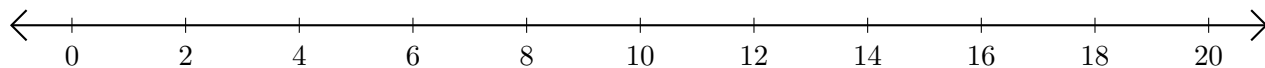
# Subtracting on Number Lines (I)

Use the number lines to calculate each difference.

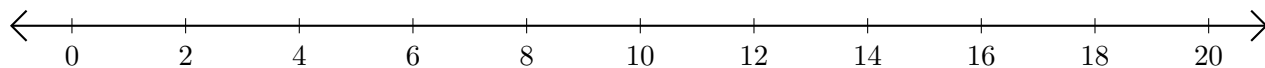
1.  $20 - 6 = \underline{\quad}$



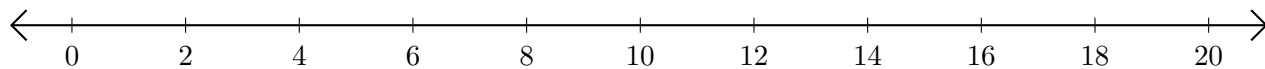
2.  $18 - 16 = \underline{\quad}$



3.  $4 - 2 = \underline{\quad}$



4.  $20 - 18 = \underline{\quad}$



5.  $14 - 8 = \underline{\quad}$

